

#1

How many bananas are there? Count by fives.

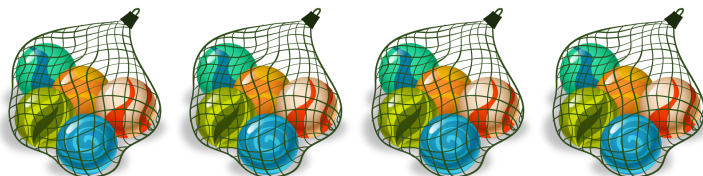


- 45                       30  
 40                       5

Show your work

#2

How many marbles are there? Count by fives.




Total:

Show your work

#3

How many red apples are there? Count by fives.




- 30                       15  
 50                       45

Show your work

#4

How many marbles are there? Count by fives.




Total:

Show your work

#5

How many red apples are there? Count by fives.



30

20


50

5

Show your work

#6

How many red apples are there? Count by fives.



25

20

5

10

Show your work

#7

How many bananas are there? Count by fives.



Total:

Show your work

#8

How many bananas are there? Count by fives.




Total:

Show your work

#9

How many marbles are there? Count by fives.



Total:

Show your work

#10

How many bananas are there? Count by fives.

 5 15 45 10

Show your work

#11


How many bananas are there? Count by fives.

Total: 

Show your work

#12

How many red apples are there? Count by fives.

Total: 

Show your work

| Question | Answer   |
|----------|----------|
| #1       | choice 1 |
| #2       | 20       |
| #3       | choice 1 |
| #4       | 50       |
| #5       | choice 1 |
| #6       | choice 4 |
| #7       | 15       |
| #8       | 45       |
| #9       | 50       |
| #10      | choice 4 |
| #11      | 5        |
| #12      | 30       |