

#1


Which number is larger?



Show your work

#2

Which number is larger?



Show your work

#3


Which number is larger?



Show your work

#4



Which number is larger?



Show your work

#5


Which number is larger?



Show your work

#6

Which number is smaller?



Show your work

#7


Which number is smaller?



Show your work

#8


Which number is larger?



Show your work

#9


Which number is smaller?



Show your work

#10

Which number is larger?



Show your work

#11

Which number is smaller?



Show your work

#12

Which number is smaller?



Show your work

| Question | Answer |
|----------|----------|
| #1 | choice 1 |
| #2 | choice 1 |
| #3 | choice 1 |
| #4 | choice 1 |
| #5 | choice 2 |
| #6 | choice 1 |
| #7 | choice 2 |
| #8 | choice 1 |
| #9 | choice 1 |
| #10 | choice 1 |
| #11 | choice 1 |
| #12 | choice 1 |