



#1

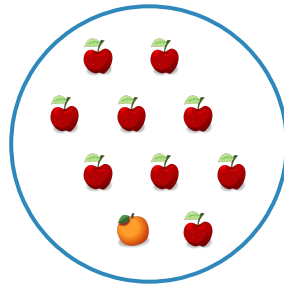

Which picture shows $5 + 4 = 9$?



Show your work

#2



Which picture shows $8 + 1 = 9$?



Show your work

#3



Which picture shows $2 + 7 = 9$?



Show your work

#4



Which picture shows $2 + 7 = 9$?



Show your work

#5



Which picture shows $9 + 1 = 10$?



Show your work

#6



Which picture shows $9 + 1 = 10$?



Show your work

#7

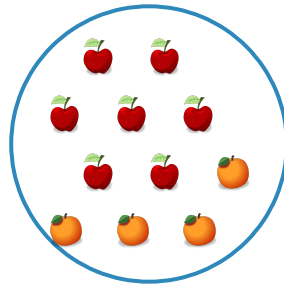

Which picture shows $3 + 6 = 9$?



Show your work

#8



Which picture shows $6 + 4 = 10$?



Show your work

#9



Which picture shows $1 + 8 = 9$?



Show your work

#10



Which picture shows $6 + 1 = 7$?



Show your work

#11



Which picture shows $1 + 1 = 2$?



Show your work

#12

Which picture shows $9 + 1 = 10$?



Show your work

| Question | Answer |
|----------|----------|
| #1 | choice 1 |
| #2 | choice 1 |
| #3 | choice 1 |
| #4 | choice 2 |
| #5 | choice 1 |
| #6 | choice 2 |
| #7 | choice 1 |
| #8 | choice 1 |
| #9 | choice 1 |
| #10 | choice 2 |
| #11 | choice 2 |
| #12 | choice 2 |