



#1



Which picture shows  $3 + 4 = 7$ ?


☐

☐

Show your work

#2



Which picture shows  $5 + 5 = 10$ ?


☐

☐

Show your work

#3



Which picture shows  $4 + 1 = 5$ ?


☐

☐

Show your work

#4



Which picture shows  $3 + 4 = 7$ ?


☐

☐

Show your work

#5



Which picture shows  $5 + 2 = 7$ ?


☐

☐

Show your work

#6


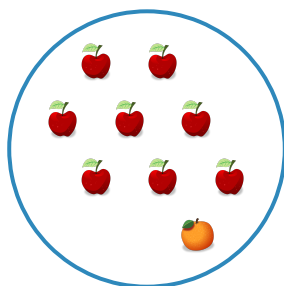
Which picture shows  $7 + 3 = 10$ ?


☐

☐

Show your work

#7



Which picture shows  $8 + 1 = 9$ ?


☐

☐

Show your work

#8



Which picture shows  $5 + 4 = 9$ ?


☐

☐

Show your work

#9



Which picture shows  $9 + 1 = 10$ ?


☐

☐

Show your work

#10



Which picture shows  $5 + 3 = 8$ ?


☐

☐

Show your work

#11



Which picture shows  $4 + 3 = 7$ ?


☐

☐

Show your work

#12

Which picture shows  $5 + 4 = 9$ ?


☐

☐

Show your work

Question	Answer
#1	choice 2
#2	choice 1
#3	choice 1
#4	choice 2
#5	choice 1
#6	choice 1
#7	choice 2
#8	choice 2
#9	choice 2
#10	choice 1
#11	choice 2
#12	choice 2