

#1

Add



10

13

12

11

Show your work

#2

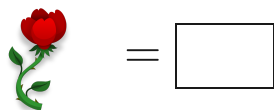
Add



Show your work

#3


Add



Show your work

#4

Add



10

11


9

7

Show your work

#5

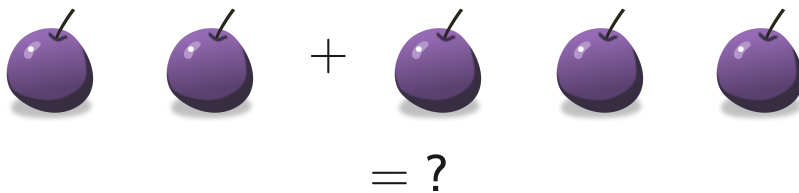
Add



Show your work

#6

Add



5

8


7

6

Show your work

#7

Add



Show your work

#8


Add



Show your work

#9

Add



6

8

7

10

Show your work

#10

Add



= ?

5

4


2

6

Show your work

#11

Add



10

9

7

12

Show your work

#12

Add



Show your work

Question	Answer
#1	10
#2	10
#3	6
#4	10
#5	3
#6	5
#7	8
#8	10
#9	8
#10	4
#11	9
#12	2