

#1

What kind of shape is this?




- hexagon
 rectangle
 triangle

Show your work

#2

What kind of shape is this?



- triangular prism
 hexagon
 triangle

Show your work

#3

What kind of shape is this?




- rectangular pyramid
 parallelogram
 hexagon

Show your work

#4

What kind of shape is this?




- triangle
 hexagon
 pentagon

Show your work

#5

What kind of shape is this?



- pentagon
 cube
 triangle

Show your work

#6

What kind of shape is this?



- parallelogram
 cube
 circle

Show your work

#7

What kind of shape is this?




- triangle
 rectangle
 parallelogram

Show your work

#8

What kind of shape is this?




- rectangle
 pentagon
 triangle

Show your work

#9

What kind of shape is this?



- pentagon
 cylinder
 triangle

Show your work



#10

What kind of shape is this?




- parallelogram cube cone

Show your work

#11

What kind of shape is this?




- triangle triangular prism circle

Show your work

#12

What kind of shape is this?



- triangular pyramid rectangle triangular prism

Show your work

Question	Answer
#1	choice 1
#2	choice 1
#3	choice 2
#4	choice 3
#5	choice 2
#6	choice 1
#7	choice 3
#8	choice 2
#9	choice 1
#10	choice 1
#11	choice 2
#12	choice 2