




#1

What kind of shape is this?




- rectangular pyramid cube cylinder

Show your work

#2

What kind of shape is this?




- rectangular prism triangular pyramid triangular prism

Show your work

#3

What kind of shape is this?




- rectangle hexagon triangular pyramid

Show your work

#4

What kind of shape is this?




- hexagon
 rectangular pyramid
 cylinder

Show your work

#5

What kind of shape is this?




- rectangle
 triangular pyramid
 cylinder

Show your work

#6

What kind of shape is this?




- cone
 cube
 hexagon

Show your work

#7

What kind of shape is this?




- rectangular prism
 triangular pyramid
 hexagon

Show your work

#8

What kind of shape is this?



- rectangular pyramid
 rectangle
 cone

Show your work

#9

What kind of shape is this?




- square
 pentagon
 triangular pyramid

Show your work



#10

What kind of shape is this?



- cube cylinder rectangular pyramid

Show your work

#11

What kind of shape is this?




- square cylinder rectangle

Show your work

#12

What kind of shape is this?



- cone rectangular prism hexagon

Show your work

| Question | Answer |
|----------|----------|
| #1 | choice 2 |
| #2 | choice 1 |
| #3 | choice 2 |
| #4 | choice 2 |
| #5 | choice 2 |
| #6 | choice 3 |
| #7 | choice 3 |
| #8 | choice 3 |
| #9 | choice 3 |
| #10 | choice 3 |
| #11 | choice 2 |
| #12 | choice 2 |