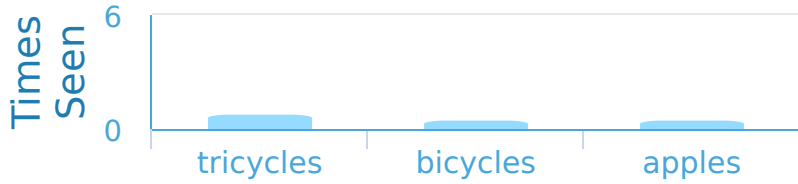


#1

While at the store Jayden made a bar graph of all the things that he'd seen. Did Jayden see more bicycles or tricycles?

Objects in the Store

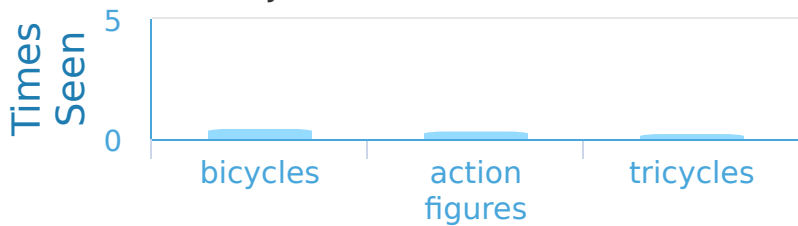


Show your work

#2

While at the store Caleb made a bar graph of all the things that he'd seen. How many more action figures than tricycles did Caleb see?

Objects in the Store



1 more

2 more

3 more

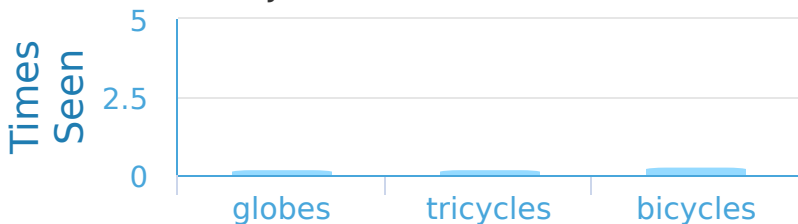
4 more

Show your work

#3

While at the store Madison made a bar graph of all the things that she'd seen. How many more bicycles than globes did Madison see?

Objects in the Store



4 more

3 more

2 more

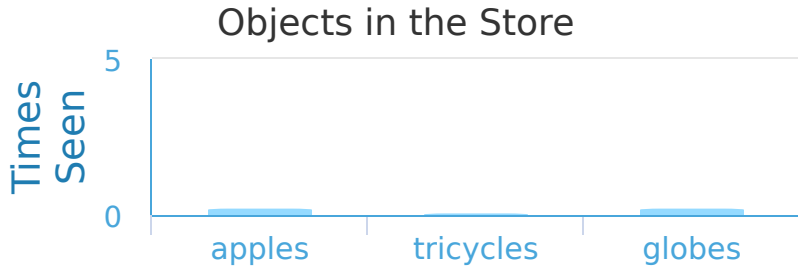
1 more

Show your work



#4

While at the store Abigail made a bar graph of all the things that she'd seen. How many more globes than apples did Abigail see?



- 0 more
- 2 more
- 1 more
- 3 more

Show your work

#5

While at the store Jackson made a bar graph of all the things that he'd seen. How many more apples than tricycles did Jackson see?



more

Show your work

#6

While at the store Kayla made a bar graph of all the things that she'd seen. How many more bicycles than globes did Kayla see?

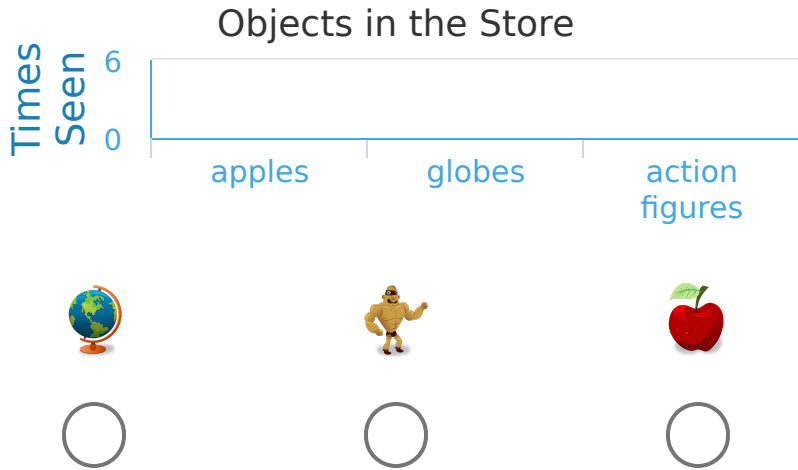


more

Show your work

#7

While at the store Alexa made a bar graph of all the things that she'd seen. Which things did Alexa see most?



Show your work

#8

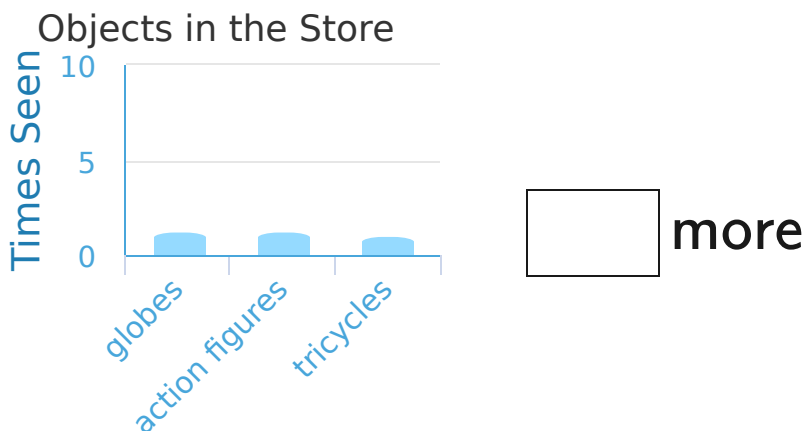
While at the store Samantha made a bar graph of all the things that she'd seen. How many more globes than action figures did Samantha see?



Show your work

#9

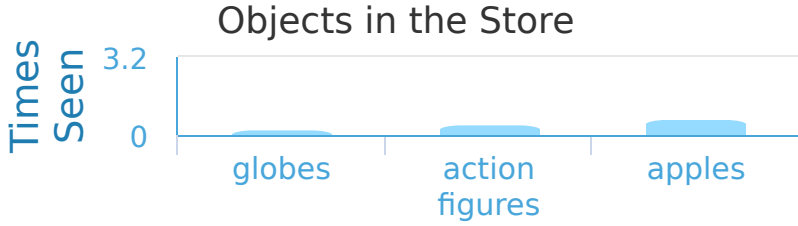
While at the store Alexa made a bar graph of all the things that she'd seen. How many more action figures than tricycles did Alexa see?



Show your work

#10

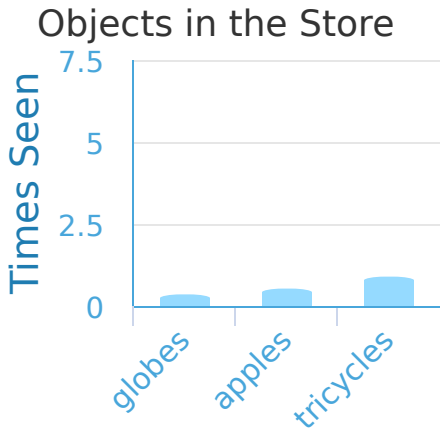
While at the store Emily made a bar graph of all the things that she'd seen. Did Emily see more action figures or globes?



Show your work

#11

While at the store Zachary made a bar graph of all the things that he'd seen. How many more tricycles than globes did Zachary see?

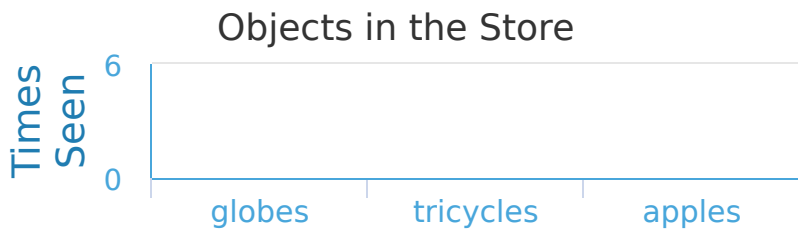


more

Show your work

#12

While at the store Brayden made a bar graph of all the things that he'd seen. Which things did Brayden see most?



Show your work

Question	Answer
#1	choice 1
#2	choice 1
#3	choice 4
#4	choice 1
#5	1
#6	2
#7	choice 1
#8	2
#9	1
#10	choice 2
#11	3
#12	choice 2