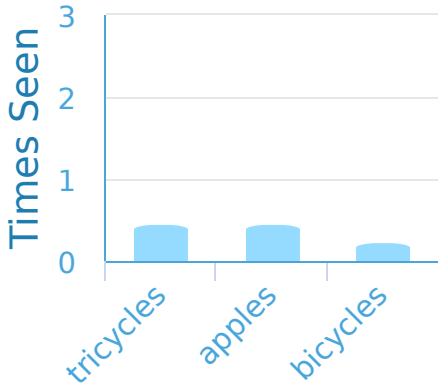


#1

While at the store Noah made a bar graph of all the things that he'd seen. How many more apples than bicycles did Noah see?

Objects in the Store



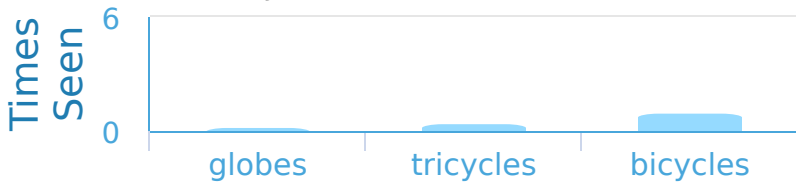
more

Show your work

#2

While at the store Sophia made a bar graph of all the things that she'd seen. Which things did Sophia see most?

Objects in the Store

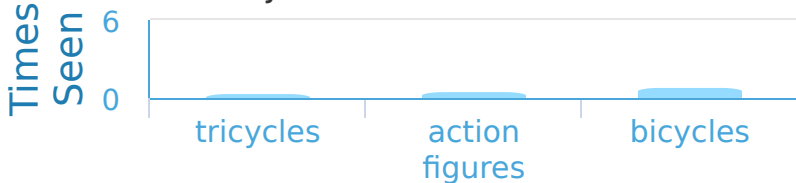


Show your work

#3

While at the store Kayla made a bar graph of all the things that she'd seen. Which things did Kayla see most?

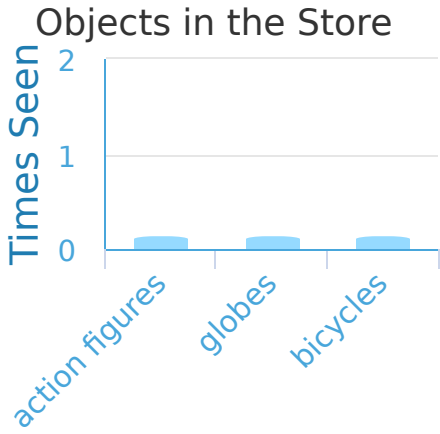
Objects in the Store



Show your work

#4

While at the store Alyssa made a bar graph of all the things that she'd seen. How many more action figures than bicycles did Alyssa see?



more

Show your work

#5

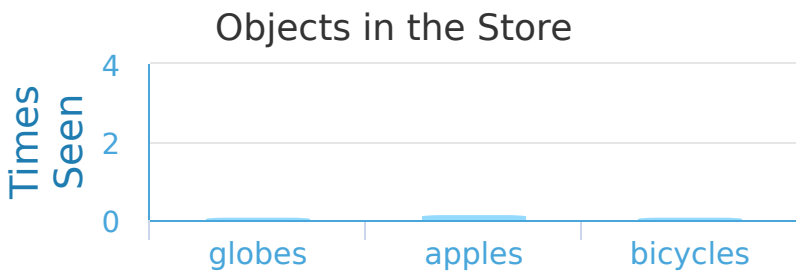
While at the store Alexa made a bar graph of all the things that she'd seen. Which things did Alexa see most?



Show your work

#6

While at the store Luke made a bar graph of all the things that he'd seen. How many more apples than bicycles did Luke see?



4 more

2 more


3 more

1 more

Show your work

#7


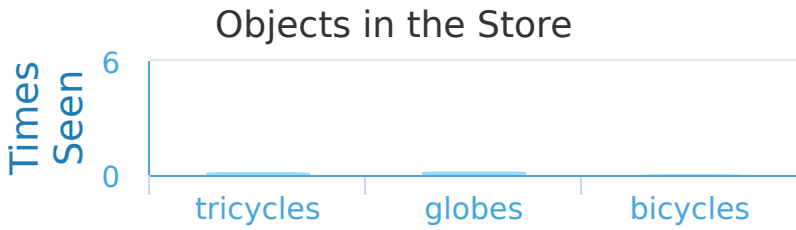
While at the store Emma made a bar graph of all the things that she'd seen. Which things did Emma see most?



Show your work

#8

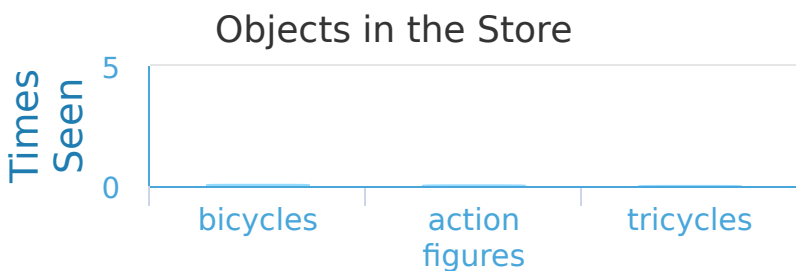
While at the store Gavin made a bar graph of all the things that he'd seen. Which things did Gavin see most?



Show your work

#9

While at the store Caleb made a bar graph of all the things that he'd seen. How many more action figures than tricycles did Caleb see?



- 1 more

2 more

3 more

4 more

Show your work



#10

While at the store Nick made a bar graph of all the things that he'd seen. Did Nick see more apples or action figures?

Objects in the Store




Show your work

#11

While at the store Alexander made a bar graph of all the things that he'd seen. How many more tricycles than action figures did Alexander see?

Objects in the Store



1 more

3 more

2 more

4 more

Show your work

#12

While at the store Cameron made a bar graph of all the things that he'd seen. How many more globes than bicycles did Cameron see?

Objects in the Store



2 more

3 more

4 more

1 more

Show your work

Question	Answer
#1	1
#2	choice 3
#3	choice 1
#4	0
#5	choice 1
#6	choice 4
#7	choice 3
#8	choice 3
#9	choice 1
#10	choice 1
#11	choice 1
#12	choice 4