




#1


Look at the following pictograph. It shows the number of rainy days per month in Seattle. How many days did it rain in March?

 day(s)

Show your work

#2


Ants are crawling on Elizabeth. Look at the following pictograph. How many ants are on her Legs?

☐ 9☐ 12☐ 6☐ 7

Show your work

#3

Look at the following pictograph. It shows the number of planes Chloe went on each month. How many times did Chloe fly in March?


 flight(s)

Show your work



#4


Look at the following pictograph. How many goals did Kayla score?

☐ 3☐ 8☐ 5☐ 6

Show your work

#5


Look at the following pictograph. It shows the number of penalty yards each football team has received. How many penalty yards did the Blue Bombers get?

☐ 5☐ 7☐ 1☐ 4

Show your work

#6

Look at the following pictograph. It shows the number of rainy days per month in Seattle. How many days did it rain in April?


 day(s)

Show your work



#7

Look at the following pictograph. How many goals did Jacob score?

 goal(s)

Show your work

#8


Look at the following pictograph. It shows the number of planes Michael went on each month. How many times did Michael fly in February?

 flight(s)

Show your work

#9

Look at the following pictograph. It shows the number of rainy days per month in Seattle. How many days did it rain in January?


 day(s)

Show your work



#10

Look at the following pictograph. How many action figures does Luke own?



☐ 6

☐ 4

☐ 7

☐ 5

Show your work

#11

Ants are crawling on Owen. Look at the following pictograph. How many ants are on his Stomach?



☐ 9

☐ 12


☐ 10

☐ 7

Show your work

#12

Look at the following pictograph. It shows the number of penalty yards each football team has received. How many penalty yards did the Predators get?



penalty yard(s)

Show your work

Question	Answer
#1	6
#2	9
#3	5
#4	6
#5	4
#6	3
#7	9
#8	8
#9	1
#10	4
#11	10
#12	3