

#1

Ashley frequently flies for business. She made a chart of the number of flights made each month. Use the data below to complete the pictograph.

Flights Made

Month	January	February	March
Flights	8	6	8




Show your work

#2

Joshua made a table of the baskets he made at practice. Use the data below to complete the pictograph.

Baskets made

Day	Monday	Tuesday	Wednesday
Baskets	1	10	3




Show your work

#3

Kaitlyn made a table of the baskets she made at practice. Use the data below to complete the pictograph.

Baskets made

Day	Monday	Tuesday	Wednesday
Baskets	1	7	3




Show your work

#4

Grace is a galactic explorer looking for habital planets and has arrived at a new solar system, Gliese 581. She wants to mark the number of moons around each planet in a graph. Use the data below to complete the pictograph.

Moons Around Planets

Planet	Gliese 581 b	Gliese 581 c	Gliese 581 d
Moon	6	9	3




Show your work

#5

At Ashley Elementary School students in the grade 2 class compare the number of action figures owned. Use the data below to complete the pictograph.

Action Figures owned

Name	Brianna	Abigail	Makayla
Number	6	4	0




Show your work

#6

Jayden lives in the rainy city of Vancouver. He made a chart of the number of times he had to use an umbrella each month. Use the data below to complete the pictograph.

Umbrellas Used Each Month

Month	January	Febuary	March
Umbrellas	5	7	5




Show your work

#7

Luke is covered in ants. The table below shows where on his body the ants are located. Use the data below to complete the pictograph.

Ant Location			
Location	Arm	Stomach	Leg
Number of Ants	10	7	8



Show your work

#8

Julia lives in the rainy city of Vancouver. She made a chart of the number of times she had to use an umbrella each month. Use the data below to complete the pictograph.

Umbrellas Used Each Month			
Month	January	February	March
Umbrellas	0	7	3




Show your work

#9

While playing musical chairs, a chart was made for how many chairs several of the kids sat in before they were eliminated. Use the data below to complete the pictograph.

Chairs Sat In			
Name	Kevin	Addison	Nathan
Chairs	2	6	2




Show your work

#10

Tyler is covered in ants. The table below shows where on his body the ants are located. Use the data below to complete the pictograph.

Ant Location			
Location	Arm	Stomach	Leg
Number of Ants	2	0	1



Show your work

#11

While playing musical chairs, a chart was made for how many chairs several of the kids sat in before they were eliminated. Use the data below to complete the pictograph.

Chairs Sat In			
Name	Abigail	Noah	Zachary
Chairs	2	10	10




Show your work

#12

Gabriel made a table of the baskets he made at practice. Use the data below to complete the pictograph.

Baskets made			
Day	Monday	Tuesday	Wednesday
Baskets	10	6	2



Show your work

Question	Answer
#1	8, 6, 8
#2	1, 10, 3
#3	1, 7, 3
#4	6, 9, 3
#5	6, 4, 0
#6	5, 7, 5
#7	10, 7, 8
#8	0, 7, 3
#9	2, 6, 2
#10	2, 0, 1
#11	2, 10, 10
#12	10, 6, 2