



#1

What is the area of this shape? Every square represents one unit square.



unit squares

Show your work

#2

What is the area of this shape? Every square represents one unit square.



unit squares

Show your work

#3

What is the area of this shape? Every square represents one unit square.



unit squares

Show your work



#4

What is the area of this shape? Every square represents one unit square.




unit squares

Show your work

#5

What is the area of this shape? Every square represents one unit square.




- 4 units                       0 units  
 5 units                       3 units

Show your work

#6

What is the area of this shape? Every square represents one unit square.



- 6 units                       2 units  
 3 units                       5 units

Show your work



#7

What is the area of this shape? Every square represents one unit square.



unit squares

Show your work

#8

What is the area of this shape? Every square represents one unit square.




unit squares

Show your work

#9

What is the area of this shape? Every square represents one unit square.



- 3 units                       1 units  
 0 units                       4 units

Show your work



#10

What is the area of this shape? Every square represents one unit square.



unit squares

Show your work

#11

What is the area of this shape? Every square represents one unit square.



- 3 units                       2 units  
 0 units                       4 units

Show your work

#12

What is the area of this shape? Every square represents one unit square.



unit squares

Show your work

Question	Answer
#1	3
#2	5
#3	5
#4	5
#5	choice 4
#6	choice 3
#7	3
#8	3
#9	choice 2
#10	2
#11	choice 1
#12	3