



#1

What is the area of this shape? Every square represents one unit square.



unit squares

Show your work

#2

What is the area of this shape? Every square represents one unit square.



unit squares

Show your work

#3

What is the area of this shape? Every square represents one unit square.



unit squares

Show your work



#4

What is the area of this shape? Every square represents one unit square.




unit squares

Show your work

#5

What is the area of this shape? Every square represents one unit square.




- 4 units                       0 units  
 2 units                       3 units

Show your work

#6

What is the area of this shape? Every square represents one unit square.




- 8 units                       6 units  
 4 units                       5 units

Show your work



#7

What is the area of this shape? Every square represents one unit square.



- 1 units                       7 units  
 2 units                       4 units

Show your work

#8

What is the area of this shape? Every square represents one unit square.



unit squares

Show your work

#9

What is the area of this shape? Every square represents one unit square.




unit squares

Show your work



#10

What is the area of this shape? Every square represents one unit square.



- 5 units                       2 units  
 4 units                       7 units

Show your work

#11

What is the area of this shape? Every square represents one unit square.



unit squares

Show your work

#12

What is the area of this shape? Every square represents one unit square.



unit squares

Show your work

Question	Answer
#1	3
#2	2
#3	2
#4	2
#5	choice 4
#6	choice 4
#7	choice 4
#8	5
#9	2
#10	choice 3
#11	4
#12	3