



#1

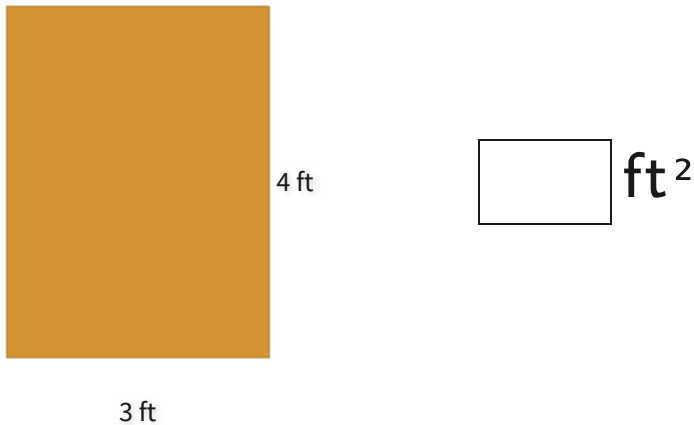
What is the area of this figure?

 7 ft^2 9 ft^2 13 ft^2 10 ft^2

Show your work

#2

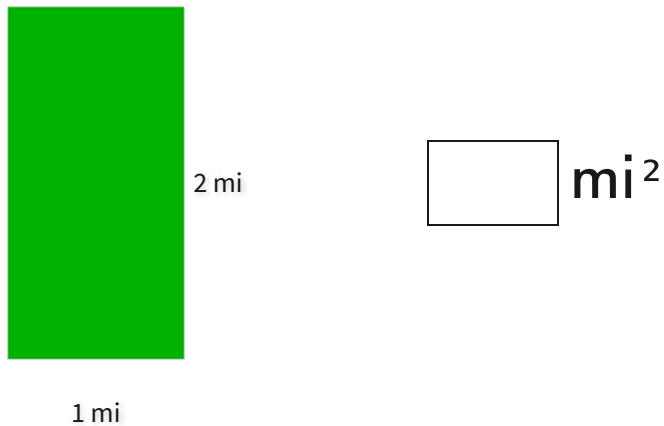
What is the area of this figure?



Show your work

#3

What is the area of this figure?




Show your work



#4

What is the area of this figure?



5 mi

 mi^2

3 mi

Show your work

#5

What is the area of this figure?



3 in

5 in

 15 in^2 10 in^2 19 in^2 17 in^2

Show your work

#6

What is the area of this figure?



4 mm

4 mm


 15 mm^2 16 mm^2 11 mm^2 20 mm^2

Show your work



#7

What is the area of this figure?



- 17 km² 26 km²
 22 km² 20 km²

Show your work

#8

What is the area of this figure?

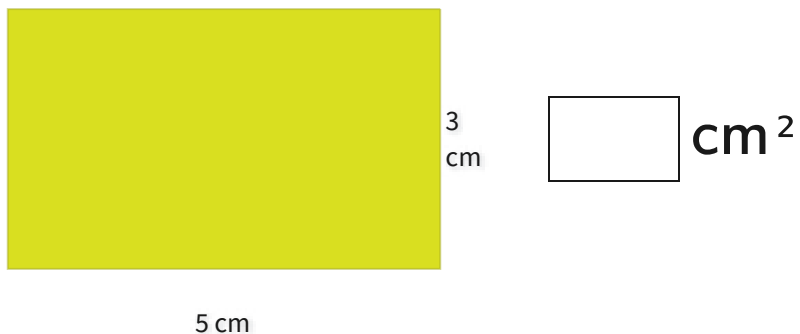


- 8 ft² 5 ft²
 6 ft² 4 ft²

Show your work

#9

What is the area of this figure?

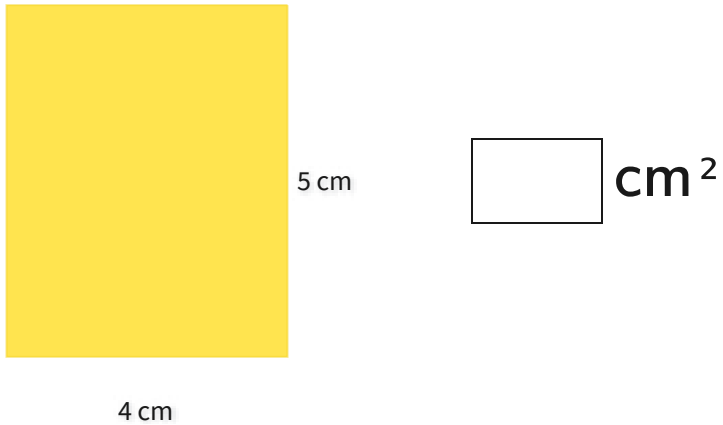


Show your work



#10

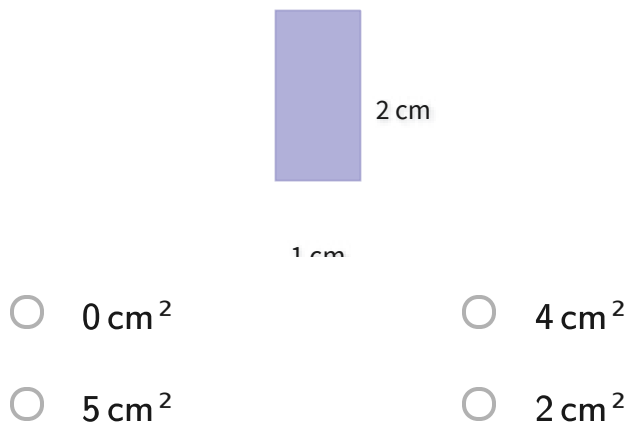
What is the area of this figure?



Show your work

#11

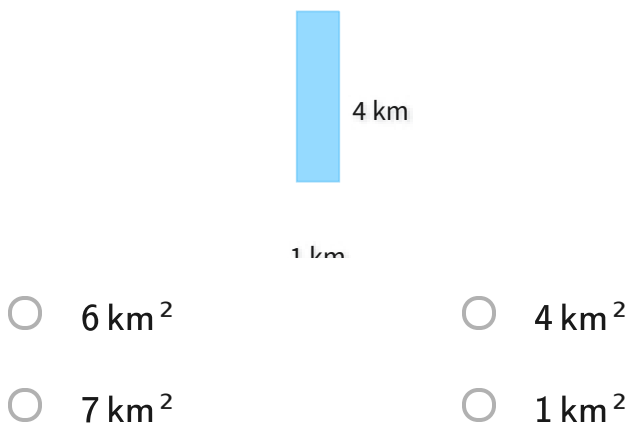
What is the area of this figure?



Show your work

#12

What is the area of this figure?



Show your work

Question	Answer
#1	choice 4
#2	12
#3	2
#4	15
#5	choice 1
#6	choice 2
#7	choice 4
#8	choice 2
#9	15
#10	20
#11	choice 4
#12	choice 2