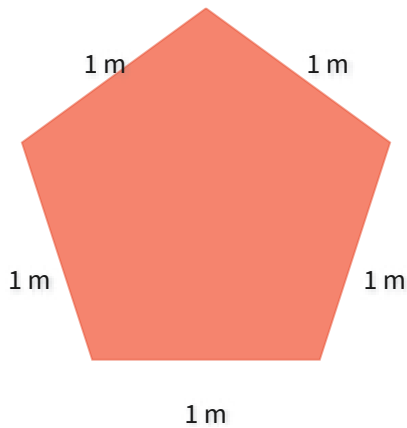




#1

What is the perimeter of this figure?

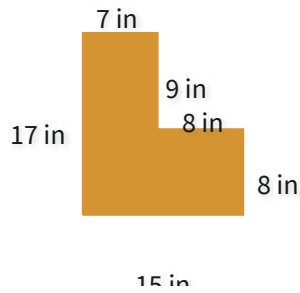


m

Show your work

#2

What is the perimeter of this figure?



77

64

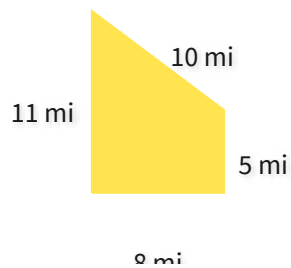
61

67

Show your work

#3

What is the perimeter of this figure?



41

34

42

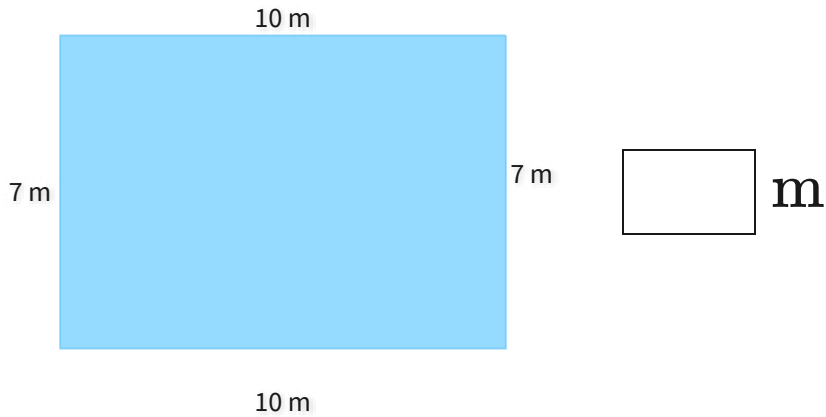
27

Show your work



#4

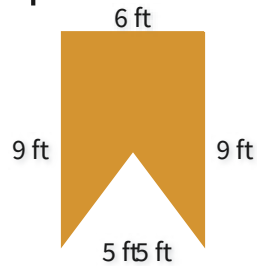
What is the perimeter of this figure?



Show your work

#5

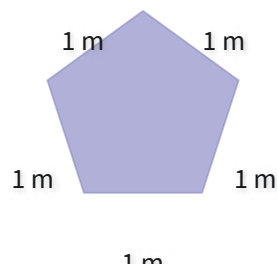
What is the perimeter of this figure?

 29 34 26 45

Show your work

#6

What is the perimeter of this figure?

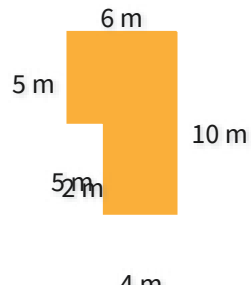
 7 8 5 4

Show your work



#7

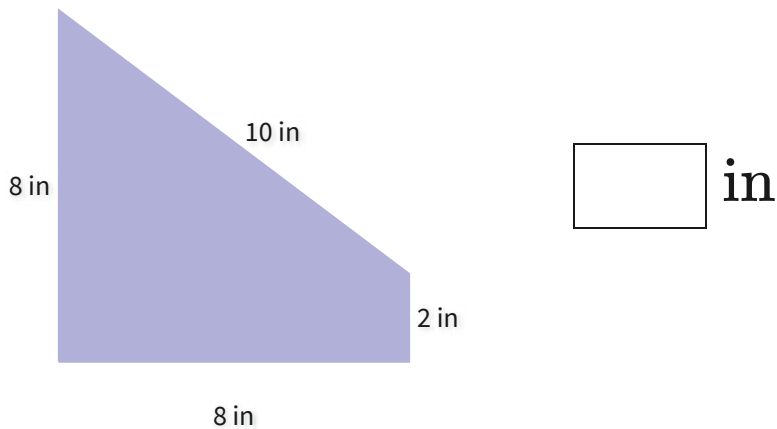
What is the perimeter of this figure?

 37 22 26 32

Show your work

#8

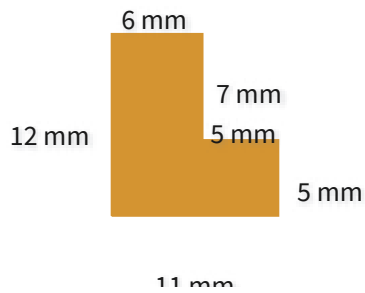
What is the perimeter of this figure?



Show your work

#9

What is the perimeter of this figure?

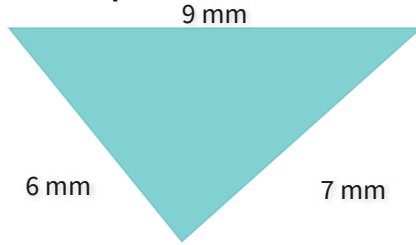
 32 42 41 46

Show your work



#10

What is the perimeter of this figure?

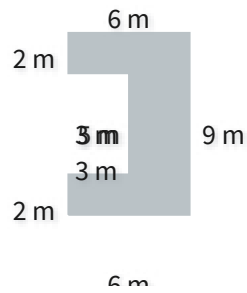


- 22 19
- 17 16

Show your work

#11

What is the perimeter of this figure?

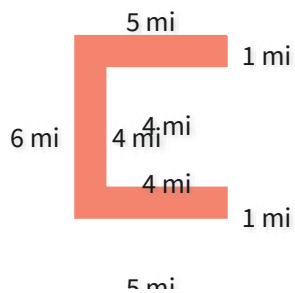


- 37 36
- 44 31

Show your work

#12

What is the perimeter of this figure?



- 21 25
- 33 30

Show your work

Question	Answer
#1	5
#2	64
#3	34
#4	34
#5	34
#6	5
#7	32
#8	28
#9	46
#10	22
#11	36
#12	30