

#1

Which shape has 3 equal sides?

Rhombus      Right Triangle      Equilateral Triangle

Show your work

#2

Which shape has 3 equal angles?

Equilateral Triangle      Rhombus      Right Triangle

Show your work

#3

Which shape has 4 equal sides?

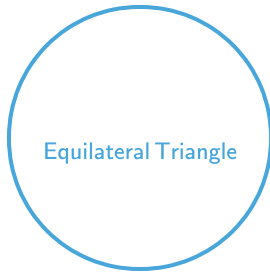

Equilateral Triangle      Rhombus      Pentagon

Show your work

#4


Which shape has 3 sides?



Show your work

#5



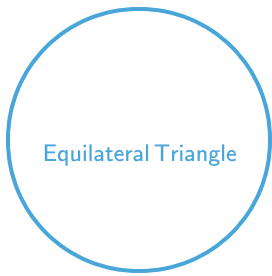
Which shape has 5 angles?



Show your work

#6

Which shape has 3 equal sides?



Show your work

#7

Which shape has 5 angles?

Pentagon      Trapezoid      Rectangle

Show your work

#8

Which shape has 4 right angles?

Trapezoid      Square      Pentagon

Show your work

#9

Which shape has 3 corners?


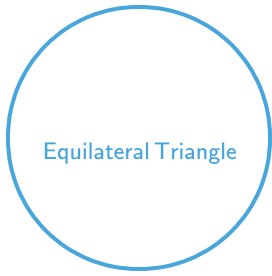
Pentagon      Square      Equilateral Triangle

Show your work

#10


Which shape has 4 equal sides?



Show your work

#11



Which shape has 5 angles?



Show your work

#12

Which shape has 2 acute angles and 2 obtuse angles?



Show your work

Question	Answer
#1	choice 3
#2	choice 1
#3	choice 2
#4	choice 3
#5	choice 3
#6	choice 1
#7	choice 1
#8	choice 2
#9	choice 3
#10	choice 3
#11	choice 1
#12	choice 2