



#1


Which figure has a greater perimeter?



Show your work

#2

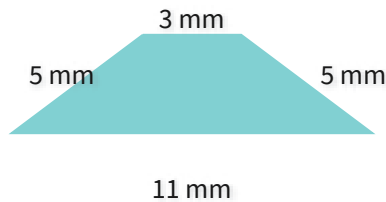
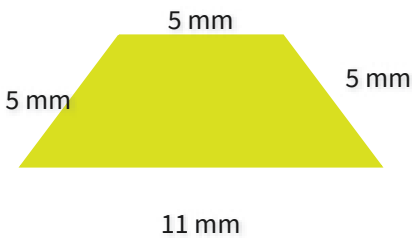
Which figure has a greater area?



Show your work

#3

Which figure has a greater perimeter?



Show your work

#4


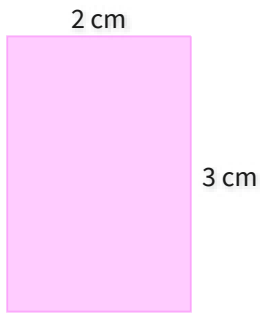
Which figure has a greater perimeter?



Show your work

#5


Which figure has a greater area?



Show your work

#6

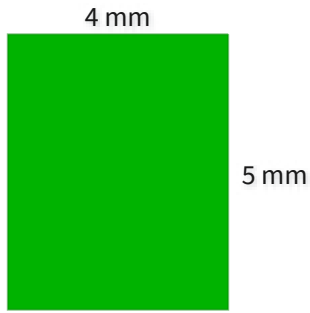
Which figure has a greater perimeter?



Show your work

#7

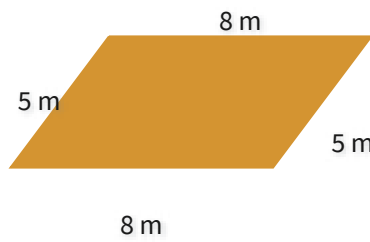
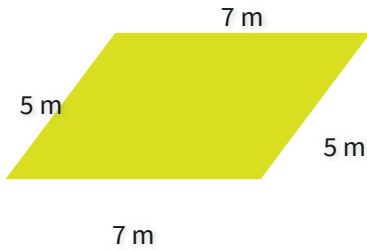
Which figure has a greater area?



Show your work

#8

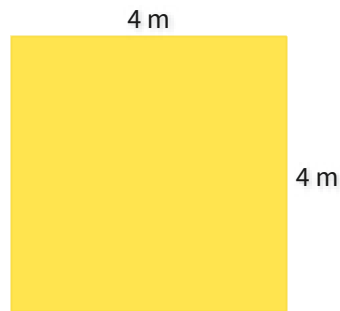
Which figure has a greater perimeter?



Show your work

#9

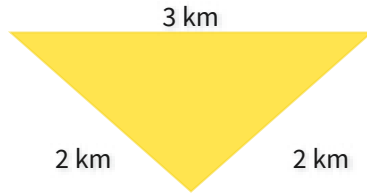
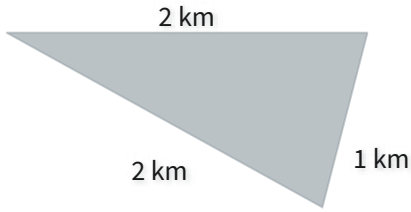
Which figure has a greater area?



Show your work

#10

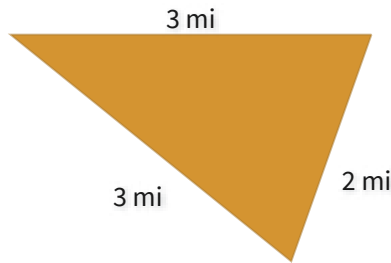
Which figure has a greater perimeter?



Show your work

#11

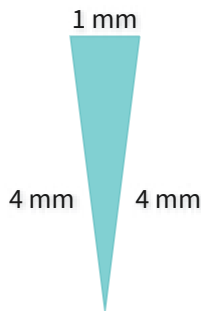
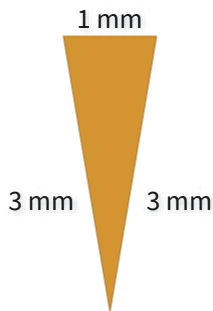
Which figure has a greater perimeter?



Show your work

#12

Which figure has a greater perimeter?



Show your work

Question	Answer
#1	choice 2
#2	choice 2
#3	choice 1
#4	choice 1
#5	choice 2
#6	choice 2
#7	choice 1
#8	choice 2
#9	choice 2
#10	choice 2
#11	choice 1
#12	choice 2