





#1


Which shape has fewer sides?



Show your work

#2


Which shape has more sides?



Show your work

#3

Which shape has more corners?




Show your work



#4

Which shape has more corners?



Show your work

#5


Which shape has fewer sides?



Show your work

#6

Which shape has fewer sides?



Show your work



#7


Which shape has more sides?



Show your work

#8



Which shape has fewer sides?



Show your work

#9

Which shape has more sides?





Show your work



#10

Which shape has fewer corners?



Show your work

#11


Which shape has more sides?



Show your work

#12

Which shape has fewer sides?



Show your work

Question	Answer
#1	choice 2
#2	choice 1
#3	choice 1
#4	choice 1
#5	choice 2
#6	choice 1
#7	choice 2
#8	choice 2
#9	choice 2
#10	choice 2
#11	choice 2
#12	choice 2