


#1

What fraction of the shape is filled?



$\frac{1}{2}$

$\frac{1}{5}$


$\frac{1}{7}$

$\frac{1}{8}$

Show your work

#2

What fraction of the shape is filled?



$\frac{1}{4}$

$\frac{1}{10}$

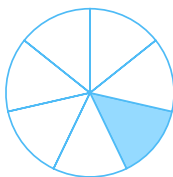
$\frac{1}{7}$

$\frac{1}{6}$

Show your work

#3

What fraction of the shape is filled?



$\frac{1}{8}$

$\frac{1}{3}$


$\frac{1}{5}$

$\frac{1}{7}$

Show your work

#4

What fraction of the shape is filled?



$\frac{1}{5}$

$\frac{1}{4}$

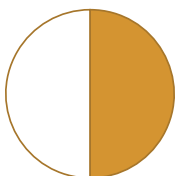
$\frac{1}{8}$

$\frac{1}{10}$

Show your work

#5

What fraction of the shape is filled?



$\frac{1}{3}$

$\frac{1}{9}$


$\frac{1}{2}$

$\frac{1}{10}$

Show your work

#6

What fraction of the shape is filled?



$\frac{1}{8}$

$\frac{1}{7}$

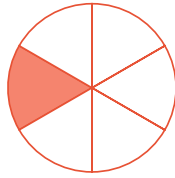
$\frac{1}{2}$

$\frac{1}{9}$

Show your work

#7

What fraction of the shape is filled?



$\frac{1}{4}$

$\frac{1}{2}$


$\frac{1}{9}$

$\frac{1}{6}$

Show your work

#8

What fraction of the shape is filled?



$\frac{1}{2}$

$\frac{1}{6}$


$\frac{1}{4}$

$\frac{1}{3}$

Show your work

#9

What fraction of the shape is filled?



$\frac{1}{2}$

$\frac{1}{9}$

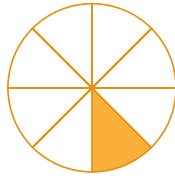
$\frac{1}{6}$

$\frac{1}{8}$

Show your work

#10

What fraction of the shape is filled?



$\frac{1}{3}$

$\frac{1}{8}$

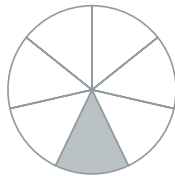
$\frac{1}{5}$

$\frac{1}{6}$

Show your work

#11

What fraction of the shape is filled?



$\frac{1}{5}$

$\frac{1}{7}$


$\frac{1}{6}$

$\frac{1}{3}$

Show your work

#12

What fraction of the shape is filled?



$\frac{1}{8}$

$\frac{1}{4}$

$\frac{1}{6}$

$\frac{1}{3}$

Show your work

| Question | Answer |
|----------|----------|
| #1 | choice 2 |
| #2 | choice 1 |
| #3 | choice 4 |
| #4 | choice 4 |
| #5 | choice 3 |
| #6 | choice 1 |
| #7 | choice 4 |
| #8 | choice 2 |
| #9 | choice 1 |
| #10 | choice 2 |
| #11 | choice 2 |
| #12 | choice 4 |