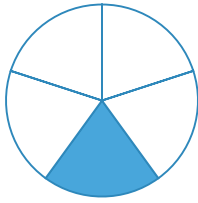
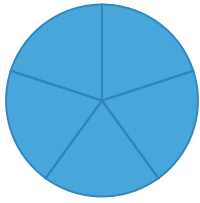


#1

Which mixed number is shown?



$1\frac{3}{4}$

$1\frac{1}{5}$

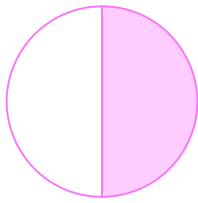

$1\frac{1}{4}$

$1\frac{1}{2}$

Show your work

#2

Which mixed number is shown?



$1\frac{1}{4}$

$1\frac{3}{5}$

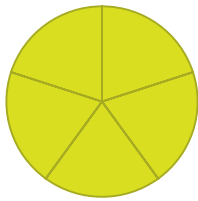
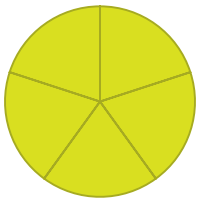
$1\frac{1}{2}$

$1\frac{1}{3}$

Show your work

#3

Which mixed number is shown?



$2\frac{1}{4}$

$2\frac{1}{3}$

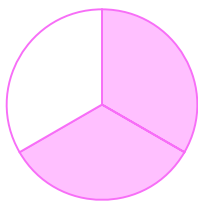
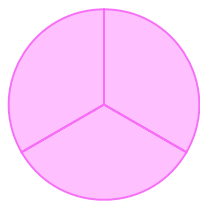
$2\frac{1}{2}$

$2\frac{1}{5}$

Show your work

#4

Which mixed number is shown?



$1\frac{2}{3}$

$1\frac{1}{5}$

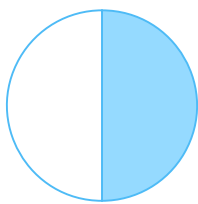
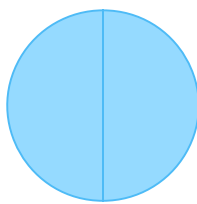
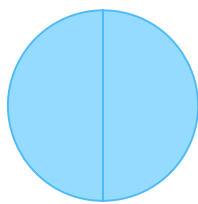
$1\frac{2}{5}$

$1\frac{1}{2}$

Show your work

#5

Which mixed number is shown?



$2\frac{1}{2}$

$2\frac{2}{5}$

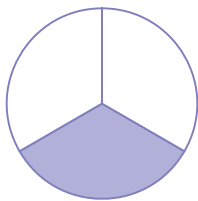
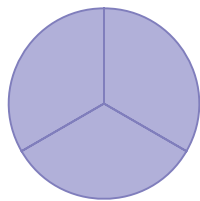
$2\frac{2}{3}$

$2\frac{4}{5}$

Show your work

#6

Which mixed number is shown?



$1\frac{1}{3}$

$1\frac{1}{4}$

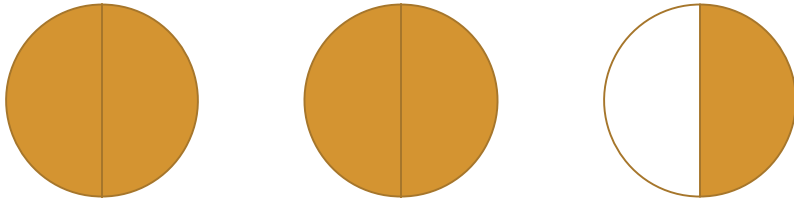
$1\frac{1}{2}$

$1\frac{3}{5}$

Show your work

#7

Which mixed number is shown?



$2\frac{1}{4}$

$2\frac{2}{5}$

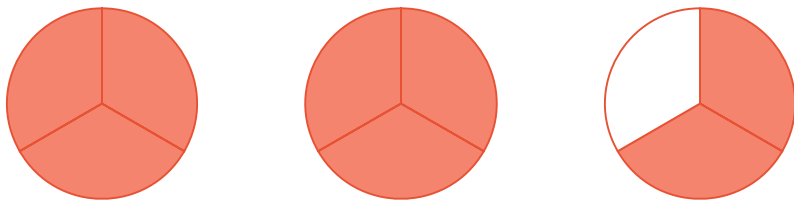
$2\frac{1}{2}$

$2\frac{3}{4}$

Show your work

#8

Which mixed number is shown?



$2\frac{2}{3}$

$2\frac{4}{5}$

$2\frac{1}{2}$

$2\frac{2}{5}$

Show your work

#9

Which mixed number is shown?



$1\frac{2}{5}$

$1\frac{1}{4}$

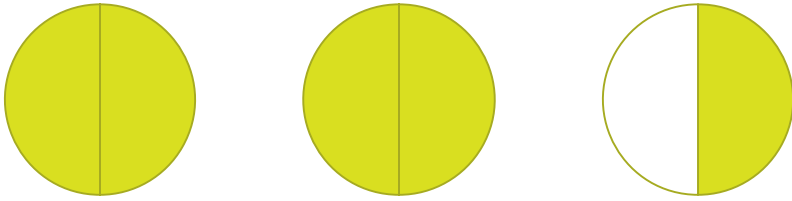
$1\frac{3}{4}$

$1\frac{1}{2}$

Show your work

#10

Which mixed number is shown?



$2\frac{1}{5}$

$2\frac{1}{3}$

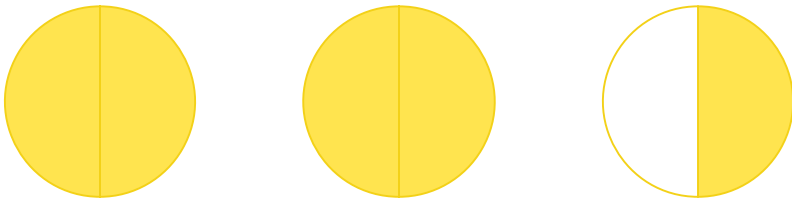
$2\frac{1}{2}$

$2\frac{3}{5}$

Show your work

#11

Which mixed number is shown?



$2\frac{1}{4}$

$2\frac{1}{2}$

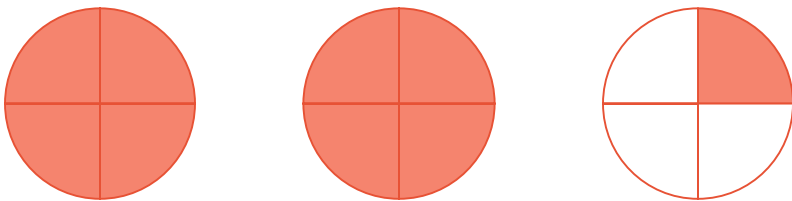
$2\frac{1}{5}$

$2\frac{2}{3}$

Show your work

#12

Which mixed number is shown?



$2\frac{1}{4}$

$2\frac{1}{3}$

$2\frac{1}{2}$

$2\frac{2}{5}$

Show your work

Question	Answer
#1	choice 2
#2	choice 3
#3	choice 4
#4	choice 1
#5	choice 1
#6	choice 1
#7	choice 3
#8	choice 1
#9	choice 3
#10	choice 3
#11	choice 2
#12	choice 1