




#1

Each square represents  $1 \text{ dm}^2$ . What is the area of this shape?




$\text{dm}^2$

Show your work

#2

Each square represents  $1 \text{ dm}^2$ . What is the area of this shape?



2 dm

3 dm


1 dm

0 dm

Show your work

#3

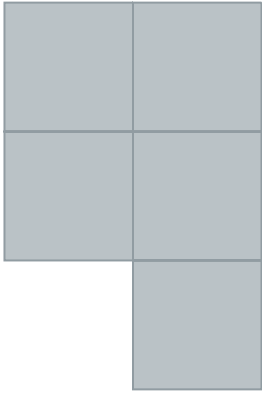
Each square represents  $1 \text{ dm}^2$ . What is the area of this shape?



$\text{dm}^2$

Show your work


#4 Each square represents  $1 \text{ ft}^2$ . What is the area of this shape?



$\text{ft}^2$

Show your work


#5 Each square represents  $1 \text{ mm}^2$ . What is the area of this shape?



$\text{mm}^2$

Show your work

#6 Each square represents  $1 \text{ yd}^2$ . What is the area of this shape?



3 yd


1 yd

6 yd

4 yd

Show your work


#7 Each square represents  $1 \text{ in}^2$ . What is the area of this shape?



$\text{in}^2$

Show your work


#8 Each square represents  $1 \text{ km}^2$ . What is the area of this shape?



$\text{km}^2$

Show your work

#9 Each square represents  $1 \text{ yd}^2$ . What is the area of this shape?



0 yd

4 yd

5 yd


3 yd

Show your work



#10


Each square represents  $1 \text{ mm}^2$ . What is the area of this shape?

  $\text{mm}^2$ 

Show your work

#11


Each square represents  $1 \text{ yd}^2$ . What is the area of this shape?

  $\text{yd}^2$ 

Show your work

#12

Each square represents  $1 \text{ in}^2$ . What is the area of this shape?

 2 in 3 in 5 in 4 in

Show your work

Question	Answer
#1	1
#2	choice 3
#3	2
#4	5
#5	1
#6	choice 1
#7	5
#8	4
#9	choice 4
#10	2
#11	3
#12	choice 3