

#1


What time does the clock show? Answer using digits and a colon (for example: 10:46).



Show your work

#2

What time does the clock show?



6:26

6:37


5:27

7:49

Show your work

#3

What time does the clock show?



1:27

12:50

1:11

12:58

Show your work

#4


What time does the clock show? Answer using digits and a colon (for example: 10:46).



Show your work

#5

What time does the clock show?




- 12:54
- 1:15
- 1:17
- 12:57

Show your work

#6

What time does the clock show?




- 11:50
- 9:09
- 10:59
- 11:57

Show your work

#7

What time does the clock show?



10:01

9:18


7:33

9:06

Show your work

#8

What time does the clock show?



10:45

10:22

10:27

7:48

Show your work

#9

What time does the clock show? Answer using digits and a colon (for example: 10:46).



Show your work

#10


What time does the clock show? Answer using digits and a colon (for example: 10:46).



Show your work

#11

What time does the clock show?



4:12

3:48


4:55

4:02

Show your work

#12

What time does the clock show?



6:16

4:36

5:39

5:02

Show your work

Question	Answer
#1	3:42
#2	choice 2
#3	choice 3
#4	7:02
#5	choice 3
#6	choice 1
#7	choice 4
#8	choice 3
#9	12:30
#10	12:44
#11	choice 2
#12	choice 4