


#1 It is now 10:00. What time will it be in 2 hours?
(EX: 12:00)



Show your work

#2 Look at this clock. What time will it be in 1 hour? (EX: 12:00)



4:00

3:00

2:00

6:00


Show your work

#3 Look at this clock. What time will it be in 2 hours? (EX: 12:00)



Show your work


#4 It is now 12:00. What time will it be in 2 hours?
(EX: 12:00)



- 2:00 4:00
 5:00 1:00

Show your work


#5 It is now 12:00. What time will it be in 1 hour?
(EX: 12:00)



- 1:00 4:00
 2:00 3:00

Show your work


#6 Look at this clock. What time will it be in 2 hours?
(EX: 12:00)



- 3:00 8:00
 4:00 6:00

Show your work


#7 It is now 7:00. What time will it be in 3 hours?
(EX: 12:00)



- 10:00 12:00
 9:00 11:00

Show your work

#8 It is now 8:00. What time will it be in 2 hours?
(EX: 12:00)



- 9:00 10:00
 7:00 12:00

Show your work

#9 It is now 5:00. What time will it be in 3 hours?
(EX: 12:00)



Show your work

#10

It is now 6:00. What time will it be in 3 hours?
(EX: 12:00)



Show your work

#11

Look at this clock. What time will it be in 3 hours?
(EX: 12:00)



Show your work

#12

It is now 8:00. What time will it be in 3 hours?
(EX: 12:00)



Show your work

| Question | Answer |
|----------|----------|
| #1 | 12:00 |
| #2 | choice 2 |
| #3 | 1:00 |
| #4 | choice 1 |
| #5 | choice 1 |
| #6 | choice 4 |
| #7 | choice 1 |
| #8 | choice 2 |
| #9 | 8:00 |
| #10 | 9:00 |
| #11 | 8:00 |
| #12 | 11:00 |