

#1

Choose the missing time.

??:?? 8:15 9:15 10:15

2:45

7:15

Show your work

#2

Choose the missing time.

8:30 ??:?? 12:30 2:30

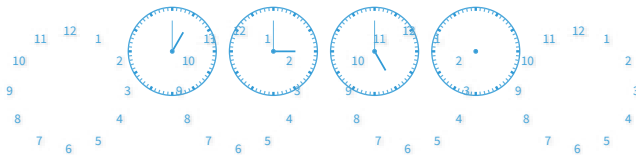
8:15

10:30

Show your work

#3

Choose the missing time.



Show your work

#4

Choose the missing time.

4:45 6:45 7:45

5:45

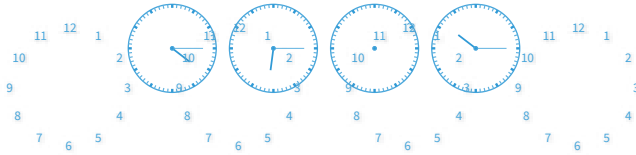
1:15



Show your work

#5

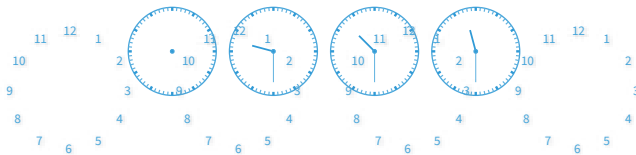
Choose the missing time.



Show your work

#6

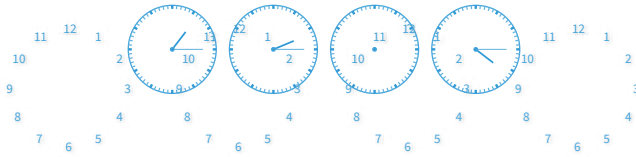
Choose the missing time.



Show your work

#7

Choose the missing time.



Show your work

#8

Choose the missing time.

6:00 8:00 12:00

2:15



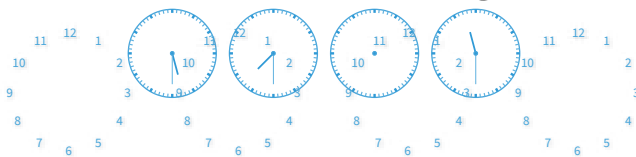
10:00



Show your work

#9

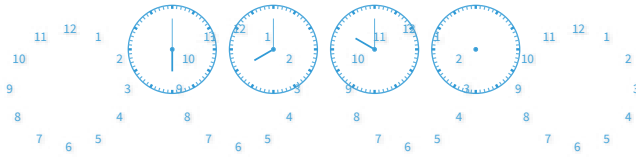
Choose the missing time.



Show your work

#10

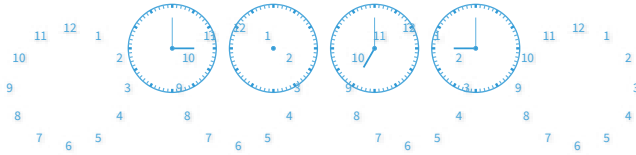
Choose the missing time.



Show your work

#11

Choose the missing time.



Show your work

#12

Choose the missing time.

: : :
 ?? : ?? 12 : 15 2 : 15 4 : 15

10 : 15



4 : 00



Show your work

Question	Answer
#1	choice 2
#2	choice 2
#3	choice 1
#4	choice 1
#5	choice 1
#6	choice 1
#7	choice 2
#8	choice 2
#9	choice 2
#10	choice 2
#11	choice 1
#12	choice 1