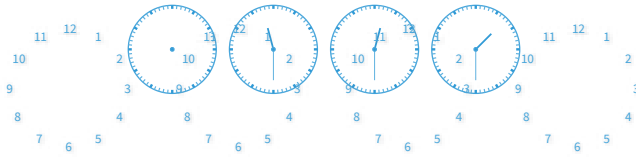


#1

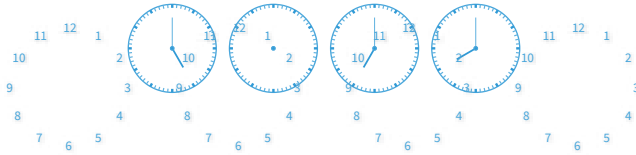
Choose the missing time.



Show your work

#2

Choose the missing time.



Show your work

#3

Choose the missing time.

4:00    :  :    8:00   10:00

6:00



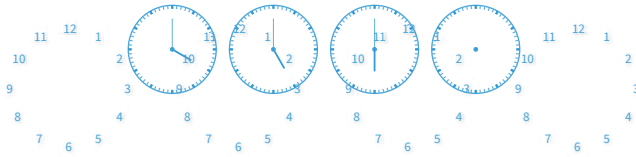
8:45



Show your work

#4

Choose the missing time.



Show your work

#5

Choose the missing time.

3:00     5:00 6:00

7:15



4:00



Show your work

#6

Choose the missing time.

1:15     5:15 7:15

3:15



1:45



Show your work

#7

Choose the missing time.

12:45 1:45 ??:?? 3:45

2:45

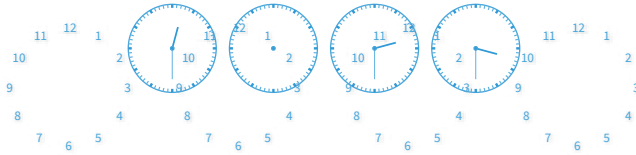
6:00



Show your work

#8

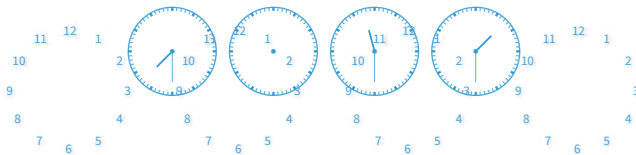
Choose the missing time.



Show your work

#9

Choose the missing time.



Show your work

#10

Choose the missing time.

9:45     11:45 12:45

9:30

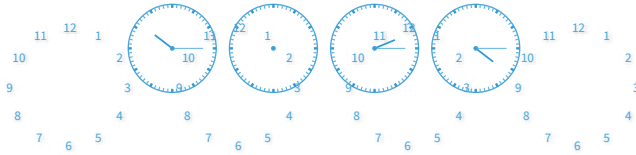
10:45



Show your work

#11

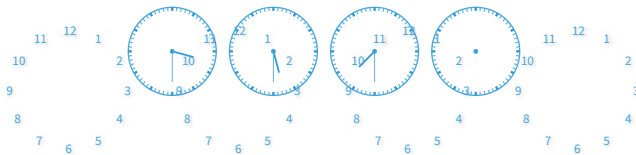
Choose the missing time.



Show your work

#12

Choose the missing time.



Show your work

Question	Answer
#1	choice 2
#2	choice 2
#3	choice 1
#4	choice 1
#5	choice 2
#6	choice 1
#7	choice 1
#8	choice 1
#9	choice 1
#10	choice 2
#11	choice 1
#12	choice 2