

#1

Look at this clock. What time will it be in 1 hour? (EX: 12:00)



Show your work

#2

Choose the best answer


Natalie went to a baseball game.
The game started at 12:00 and lasted for 2 hours. What time was it when the game ended?

 1:00 4:00 2:00 3:00

Show your work

#3

It is now 12:00. What time will it be in 3 hours? (EX: 12:00)



Show your work

#4


It is now 2:00. What time will it be in 1 hour?
(EX: 12:00)



Show your work

#5

Look at this clock. What time will it be in 1 hour? (EX: 12:00)



9:00

7:00

6:00

8:00

Show your work

#6

Every 1 hour Elizabeth likes to drink a glass of water. If the last time she drank a glass of water was 5:00, when is the next time?

Show your work

#7

Dogs need to be exercised, so Maya took her dog for a walk from 2:30 to 4:30. How long was the walk?

hours minutes

Show your work


#8

Joshua went to the pool with his friends at 3:00 until the pool closed 2 hours later. What time does the pool close?

Show your work

#9

It is now 12:00. What time will it be in 2 hours?
(EX: 12:00)



5:00

1:00

2:00

4:00

Show your work

#10

Choose the best answer
At 2:00 Nick went out fishing. 3
hours later they returned home
with 2 fish. At what time did
Nick go home?

 5:00 6:00 2:00 7:00

Show your work

#11

It is now 12:00. What time will it be in 3 hours?
(EX: 12:00)



Show your work

#12

Choose the best answer
Connor went on a walk and left
at 3:00. If he returned to find
that it was 6:00, how long was
the walk?

 1:30 2:30 3:30 3:00

Show your work

Question	Answer
#1	1:00
#2	choice 3
#3	3:00
#4	3:00
#5	choice 1
#6	6:00
#7	2, ^ *(?:0 * 00 *) *\$
#8	5:00
#9	choice 3
#10	choice 1
#11	3:00
#12	choice 4