


#1

Benjamin went to the pool with his friends at 2:00 until the pool closed 2 hours later. What time does the pool close?

Show your work

#2

It is now 12:00. What time will it be in 2 hours?  
(EX: 12:00)



5:00

3:00


2:00

4:00

Show your work

#3

It is now 3:00. What time will it be in 3 hours?  
(EX: 12:00)



8:00

7:00

6:00

5:00

Show your work


#4

At 11:00 Zachary went out fishing. 1 hour later they returned home with 2 fish. At what time did Zachary go home?

Show your work

#5

It is now 4:00. What time will it be in 1 hour?  
(EX: 12:00)



- |                            |                            |
|----------------------------|----------------------------|
| <input type="radio"/> 2:00 | <input type="radio"/> 5:00 |
| <input type="radio"/> 3:00 | <input type="radio"/> 6:00 |

Show your work

#6

Choose the best answer

When Isabella goes to visit her grandmother she usually spends 3 hours with her. If Isabella goes to visit at 8:00, what time will she leave?

- |                             |                             |
|-----------------------------|-----------------------------|
| <input type="radio"/> 12:00 | <input type="radio"/> 9:00  |
| <input type="radio"/> 10:00 | <input type="radio"/> 11:00 |

Show your work

#7

Choose the best answer

At 2:00 Nick went out fishing. 3 hours later they returned home with 2 fish. At what time did Nick go home?

- 5:00                       6:00  
 2:00                       7:00

Show your work

#8

Choose the best answer


If Daniel starts listening to a music album at 10:30 and finishes at 12:30, how long is the album?

- 1:00                       3:00  
 2:00                       2:30

Show your work

#9

Look at this clock. What time will it be in 2 hours? (EX: 12:00)



- 5:00                       2:00  
 4:00                       7:00

Show your work

#10

Connor calls Elizabeth to hang out, but Elizabeth has gymnastics at 6:00 for 1 hour. What time will Elizabeth be available to hang out?

Show your work

#11

It is now 1:00. What time will it be in 1 hour?  
(EX: 12:00)



Show your work

#12

Choose the best answer  
At 2:00 Nick went out fishing. 3 hours later they returned home with 2 fish. At what time did Nick go home?

5:00

6:00

2:00

7:00

Show your work

Question	Answer
#1	4:00
#2	choice 3
#3	choice 3
#4	12:00
#5	choice 2
#6	choice 4
#7	choice 1
#8	choice 3
#9	choice 1
#10	7:00
#11	2:00
#12	choice 1