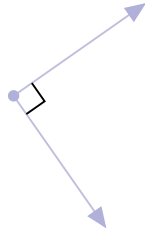


#1

Is this angle acute, right, obtuse, or straight?

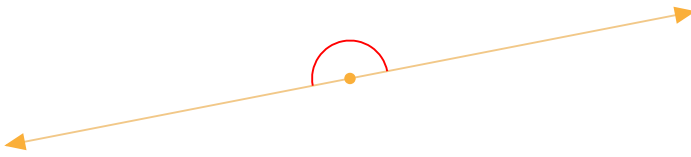


- Acute Obtuse
 Right Straight

Show your work

#2

Is this angle acute, right, obtuse, or straight?

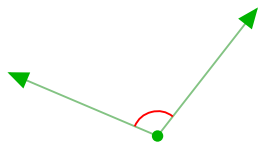


- Acute Right
 Straight Obtuse

Show your work

#3

Is this angle acute, right, obtuse, or straight?

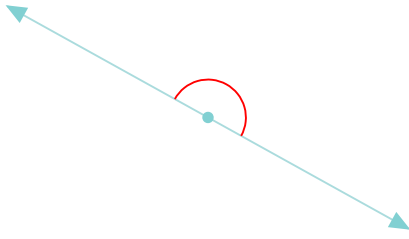


- Right Straight
 Obtuse Acute

Show your work

#4

Is this angle acute, right, obtuse, or straight?

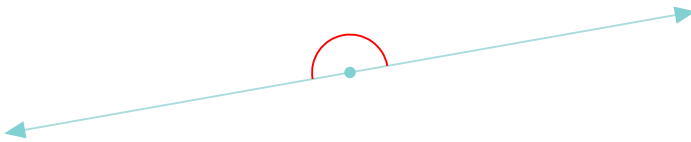


- Obtuse Acute
 Right Straight

Show your work

#5

Is this angle acute, right, obtuse, or straight?

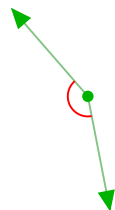


- Acute Straight
 Obtuse Right

Show your work

#6

Is this angle acute, right, obtuse, or straight?

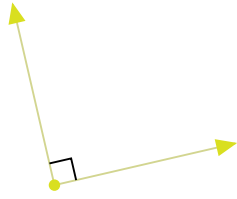


- Obtuse Acute
 Right Straight

Show your work

#7

Is this angle acute, right, obtuse, or straight?



- Right Straight
 Obtuse Acute

Show your work

#8

Is this angle acute, right, obtuse, or straight?

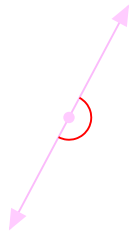


- Obtuse Straight
 Right Acute

Show your work

#9

Is this angle acute, right, obtuse, or straight?

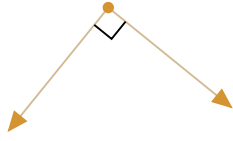


- Acute Obtuse
 Right Straight

Show your work

#10

Is this angle acute, right, obtuse, or straight?

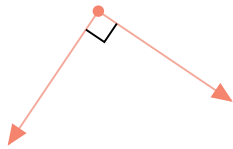


- Straight Right
 Acute Obtuse

Show your work

#11

Is this angle acute, right, obtuse, or straight?

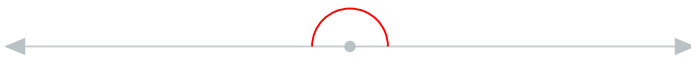


- Right Acute
 Straight Obtuse

Show your work

#12

Is this angle acute, right, obtuse, or straight?



- Acute Right
 Obtuse Straight

Show your work

Question	Answer
#1	choice 3
#2	choice 3
#3	choice 3
#4	choice 4
#5	choice 2
#6	choice 1
#7	choice 1
#8	choice 1
#9	choice 4
#10	choice 2
#11	choice 1
#12	choice 4