

#1

Which two numbers have a product of 10?



Show your work

#2

Which two numbers have a product of 8?



Show your work

#3



Which two numbers have a product of 16?



Show your work

#4


Which two numbers have a product of 16?



Show your work

#5

Which two numbers have a product of 12?



Show your work

#6


Which two numbers have a product of 18?



Show your work

#7

Which two numbers have a product of 20?



Show your work

#8

Which two numbers have a product of 18?



Show your work

#9


Which two numbers have a product of 14?



Show your work

#10


Which two numbers have a product of 8?



Show your work

#11

Which two numbers have a product of 16?



Show your work

#12

Which two numbers have a product of 12?



Show your work

Question	Answer
#1	choice 2, choice 3
#2	choice 2, choice 3
#3	choice 4, choice 3
#4	choice 3, choice 1
#5	choice 4, choice 1
#6	choice 2, choice 4
#7	choice 3, choice 1
#8	choice 1, choice 3
#9	choice 1, choice 4
#10	choice 3, choice 4
#11	choice 3, choice 4
#12	choice 2, choice 4