


#1


Choose the missing time.



Show your work

#2


Choose the missing time.



Show your work

#3

Choose the missing time.



Show your work

#4

Choose the missing time.

1:15   ::   3:15   4:15   5:15

5:45

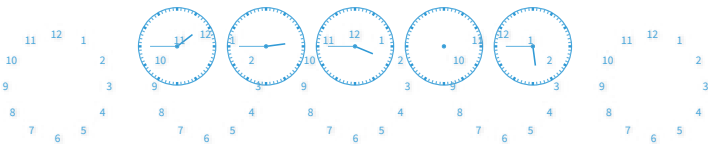
2:15



Show your work

#5


Choose the missing time.



Show your work

#6

Choose the missing time.



Show your work

#7

Choose the missing time.

2:00 3:00 4:00 ??:?? 6:00

4:30


5:00



Show your work

#8

Choose the missing time.





Show your work

#9

Choose the missing time.

??:?? 8:30 10:30 12:30 2:30

6:30


1:30



Show your work

#10


Choose the missing time.



Show your work

#11

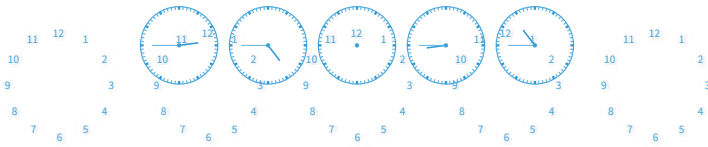
Choose the missing time.



Show your work

#12

Choose the missing time.



Show your work

Question	Answer
#1	choice 2
#2	choice 1
#3	choice 1
#4	choice 2
#5	choice 2
#6	choice 2
#7	choice 2
#8	choice 1
#9	choice 1
#10	choice 1
#11	choice 1
#12	choice 2