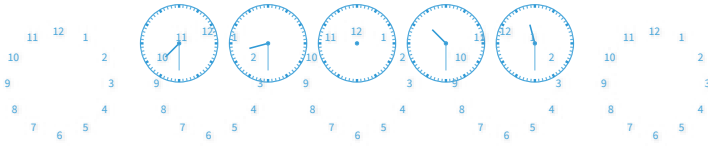


#1

Choose the missing time.





Show your work

#2

Choose the missing time.

??:?? 8:30 10:30 12:30 2:30



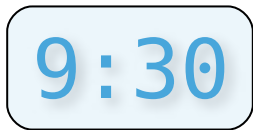


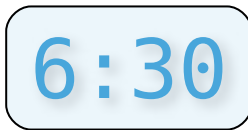
Show your work

#3

Choose the missing time.

5:30 7:30 ??:?? 11:30 1:30





Show your work

#4

Choose the missing time.

10:15 11:15 ??:?? 1:15 2:15

7:00

12:15

Show your work

#5

Choose the missing time.

2:45 4:45 6:45 ??:?? 10:45

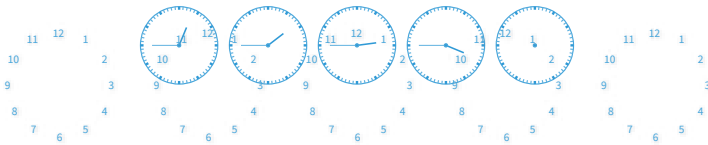
2:45

8:45

Show your work

#6

Choose the missing time.





Show your work

#7

Choose the missing time.

1:00 3:00 ??:?? 7:00 9:00


9:15

5:00

Show your work

#8

Choose the missing time.



Show your work

#9

Choose the missing time.

??:?? 6:45 8:45 10:45 12:45


1:00

4:45

Show your work

#10

Choose the missing time.



Show your work

#11


Choose the missing time.



Show your work

#12

Choose the missing time.



Show your work

| Question | Answer |
|----------|----------|
| #1 | choice 2 |
| #2 | choice 1 |
| #3 | choice 1 |
| #4 | choice 2 |
| #5 | choice 2 |
| #6 | choice 2 |
| #7 | choice 2 |
| #8 | choice 2 |
| #9 | choice 2 |
| #10 | choice 2 |
| #11 | choice 1 |
| #12 | choice 1 |