



#1

Is this shape a quadrilateral?




No

Yes

Show your work

#2

Is this shape a quadrilateral?




No

Yes

Show your work

#3

Is this shape a rhombus?



No

Yes

Show your work

#4

Is this shape a parallelogram?




- No
 Yes

Show your work

#5

Is this shape a trapezoid?




- No
 Yes

Show your work

#6

Is this shape a rectangle?




- Yes
 No

Show your work

#7

Is this shape a parallelogram?




- No
 Yes

Show your work

#8

Is this shape a parallelogram?



- No
 Yes

Show your work

#9

Is this shape a rhombus?




- Yes
 No

Show your work



#10

Is this shape a parallelogram?




Yes

No

Show your work

#11

Is this shape a quadrilateral?




No

Yes

Show your work

#12

Is this shape a rectangle?



No

Yes

Show your work

Question	Answer
#1	choice 2
#2	choice 2
#3	choice 1
#4	choice 2
#5	choice 2
#6	choice 1
#7	choice 2
#8	choice 1
#9	choice 2
#10	choice 2
#11	choice 2
#12	choice 2