




#1

Each square represents 1 mi. What is the perimeter of this shape?




- 17 mi
- 16 mi
- 14 mi
- 10 mi

Show your work

#2

Each square represents 1 m. What is the perimeter of this shape?




m

Show your work

#3

Each square represents 1 km. What is the perimeter of this shape?



km

Show your work



#4

Each square represents 1 yd. What is the perimeter of this shape?




yds

Show your work

#5

Each square represents 1 mm. What is the perimeter of this shape?




- 12 mm 16 mm
 14 mm 17 mm

Show your work

#6

Each square represents 1 dm. What is the perimeter of this shape?




dm

Show your work



#7

Each square represents 1 m. What is the perimeter of this shape?



6 m

8 m

5 m

7 m

Show your work

#8

Each square represents 1 in. What is the perimeter of this shape?



in

Show your work

#9

Each square represents 1 mi. What is the perimeter of this shape?




mi

Show your work



#10


Each square represents 1 in. What is the perimeter of this shape?

 in

Show your work

#11


Each square represents 1 cm. What is the perimeter of this shape?

 cm

Show your work

#12

Each square represents 1 dm. What is the perimeter of this shape?

 dm

Show your work

Question	Answer
#1	choice 2
#2	16
#3	6
#4	10
#5	choice 2
#6	12
#7	choice 1
#8	10
#9	10
#10	10
#11	14
#12	16