



#1

Each square represents 1 m. What is the perimeter of this shape?



4 m

6 m


9 m

3 m

Show your work

#2

Each square represents 1 mi. What is the perimeter of this shape?



12 mi

14 mi

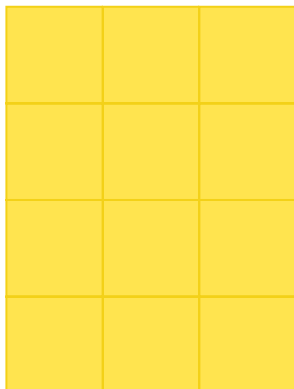
13 mi

15 mi

Show your work

#3

Each square represents 1 mi. What is the perimeter of this shape?




mi

Show your work



#4

Each square represents 1 km. What is the perimeter of this shape?



km

Show your work

#5

Each square represents 1 yd. What is the perimeter of this shape?



yds

Show your work

#6

Each square represents 1 dm. What is the perimeter of this shape?



3 dm

4 dm

6 dm


7 dm

Show your work



#7

Each square represents 1 km. What is the perimeter of this shape?



- 12 km 11 km
 15 km 14 km

Show your work

#8

Each square represents 1 dm. What is the perimeter of this shape?

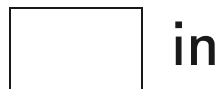


- 6 dm 5 dm
 2 dm 4 dm

Show your work

#9

Each square represents 1 in. What is the perimeter of this shape?




Show your work



#10

Each square represents 1 yd. What is the perimeter of this shape?



- 10 yd 7 yd
 9 yd 11 yd

Show your work

#11

Each square represents 1 cm. What is the perimeter of this shape?




- 10 cm 8 cm
 7 cm 6 cm

Show your work

#12

Each square represents 1 yd. What is the perimeter of this shape?



- 5 yd 8 yd
 3 yd 6 yd

Show your work

Question	Answer
#1	choice 2
#2	choice 2
#3	14
#4	12
#5	8
#6	choice 3
#7	choice 1
#8	choice 4
#9	8
#10	choice 1
#11	choice 2
#12	choice 4