

#1

Look at this pattern. Which comes next?

96696696

 966

 669

 996

 696

Show your work

#2

How would you define this pattern using letters?


 ABB

 AABB




 AAB

 AB

Show your work

#3

Look at this pattern. Which comes next?



Show your work

#4

How would you define this pattern using letters?




- AB
- AABB
- AAB
- ABB

Show your work

#5

Look at this pattern. Which comes next?

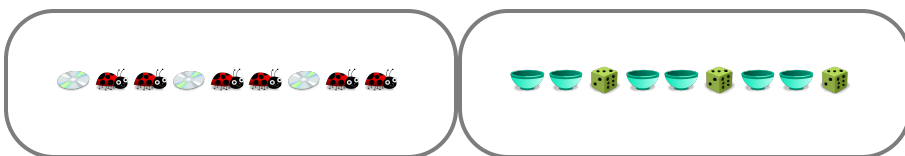


-
-
-

Show your work

#6

Select the matching pattern:



-
-

Show your work

#7

Select the matching pattern:

977977977

- 664664664
- 100100100
- 33223322
- 58585858

Show your work

#8

Select the matching pattern:



Show your work

#9

Select the matching pattern:



Show your work

#10

Select the matching pattern:


553553553

- 60606060 99229922
 144144144 778778778

Show your work

#11

Look at this pattern. Which comes next?



-

Show your work

#12

How would you define this pattern using letters?



- AAB AABB
 ABB AB

Show your work

Question	Answer
#1	choice 4
#2	choice 2
#3	choice 3
#4	choice 1
#5	choice 3
#6	choice 2
#7	choice 2
#8	choice 2
#9	choice 1
#10	choice 4
#11	choice 2
#12	choice 3