

#1

How would you define this pattern using letters?



- AAB                       ABB  
 AABB                       AB

Show your work

#2

Look at this pattern. Which comes next?


77177177

- 177                       711  
 171                       771

Show your work

#3

Select the matching pattern:



Show your work

#4

How would you define this pattern using letters?



- AAB
- AABB
- ABB
- AB

Show your work

#5

How would you define this pattern using letters?

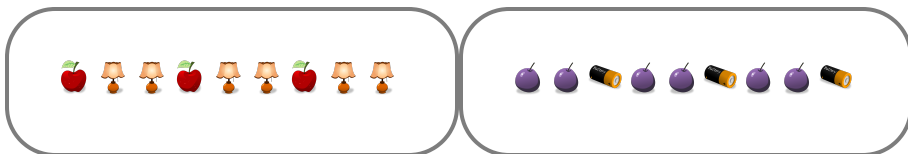


- AB
- ABB
- AAB
- AABB

Show your work

#6

Select the matching pattern:

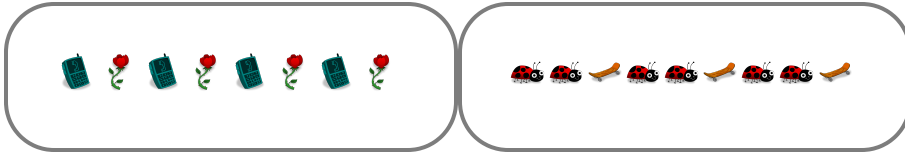




Show your work

#7

Select the matching pattern:






Show your work

#8

Look at this pattern. Which comes next?






Show your work

#9

Look at this pattern. Which comes next?

76676676

 667

 676


 776

 766

Show your work

#10

Look at this pattern. Which comes next?






Show your work

#11

How would you define this pattern using letters?


 ABB

 AAB

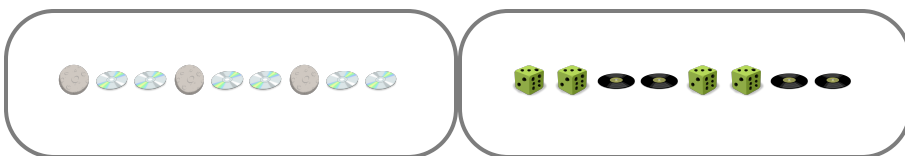
 AABB

 AB

Show your work

#12

Select the matching pattern:





Show your work

Question	Answer
#1	choice 1
#2	choice 1
#3	choice 1
#4	choice 2
#5	choice 3
#6	choice 2
#7	choice 1
#8	choice 2
#9	choice 2
#10	choice 1
#11	choice 4
#12	choice 2