


#1

The rectangles below have the same perimeter. If the area of the right rectangle is 12 sq km, what are its dimensions?

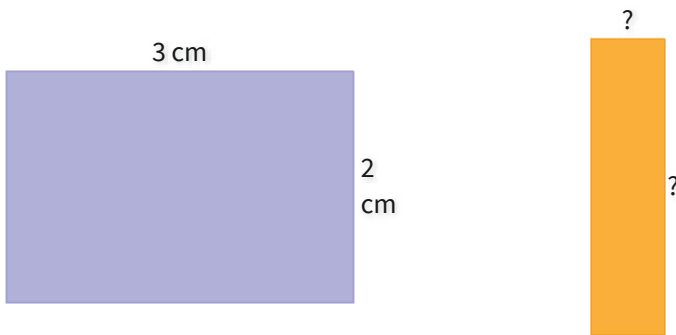


- 3km by 4km
 1km by 3km
 4km by 1km

Show your work

#2

The rectangles below have the same perimeter. If the area of the right rectangle is 4 sq cm, what are its dimensions?

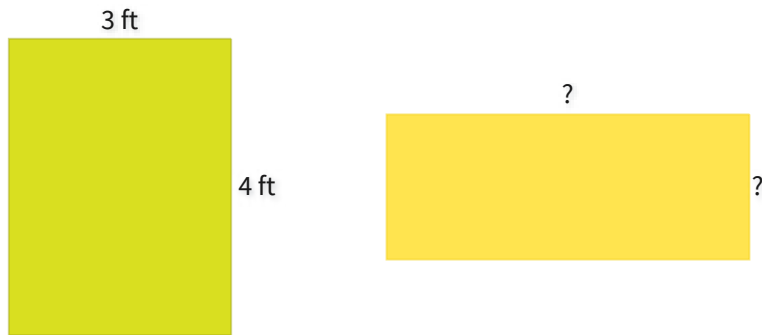


- 1cm by 4cm
 4cm by 5cm
 5cm by 1cm

Show your work

#3

The rectangles below have the same perimeter. If the area of the right rectangle is 10 sq ft, what are its dimensions?

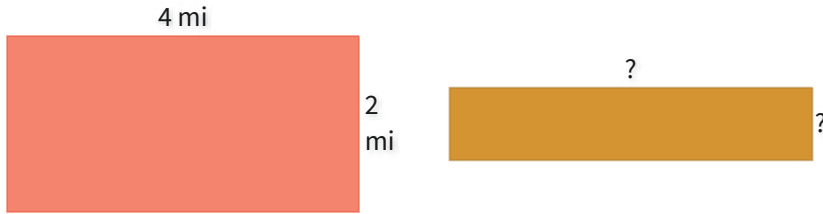


- 3ft by 5ft
 2ft by 3ft
 5ft by 2ft

Show your work

#4

The rectangles below have the same perimeter. If the area of the right rectangle is 5 sq mi, what are its dimensions?

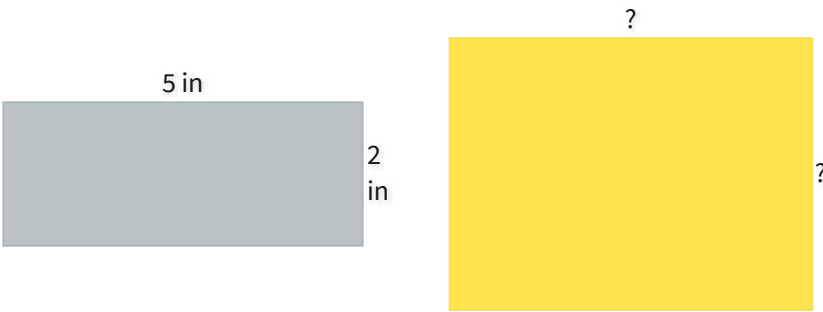


- 1mi by 2mi
 2mi by 5mi
 5mi by 1mi

Show your work

#5

The rectangles below have the same perimeter. If the area of the right rectangle is 12 sq in, what are its dimensions?

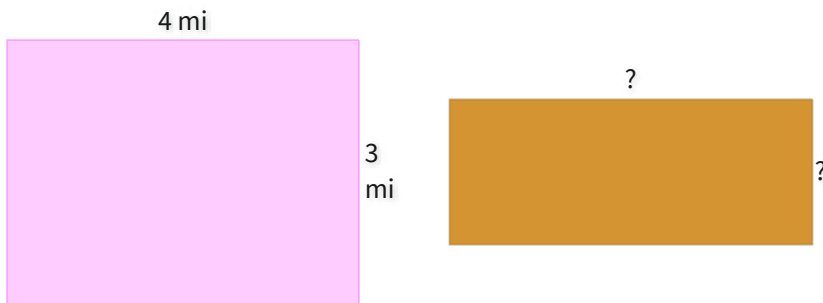


- 3in by 5in
 5in by 4in
 4in by 3in

Show your work

#6

The rectangles below have the same perimeter. If the area of the right rectangle is 10 sq mi, what are its dimensions?

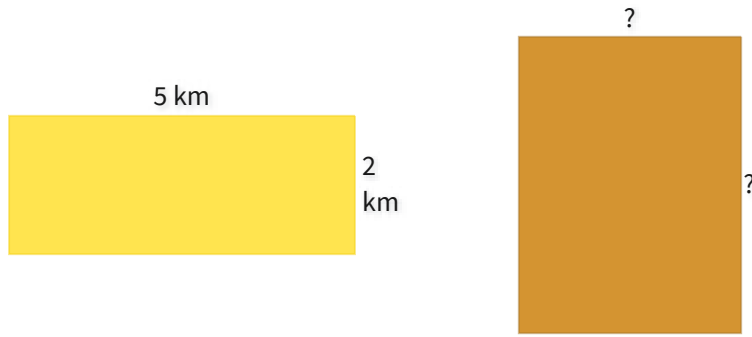


- 1mi by 5mi
 5mi by 2mi
 2mi by 1mi

Show your work

#7

The rectangles below have the same perimeter. If the area of the right rectangle is 12 sq km, what are its dimensions?

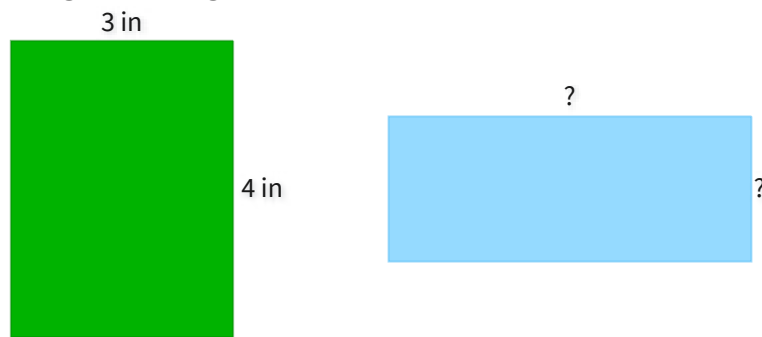


- 3km by 4km
 1km by 3km
 4km by 1km

Show your work

#8

The rectangles below have the same perimeter. If the area of the right rectangle is 10 sq in, what are its dimensions?



- 2in by 4in
 5in by 2in
 4in by 5in

Show your work

#9

The rectangles below have the same perimeter. If the area of the right rectangle is 5 sq in, what are its dimensions?

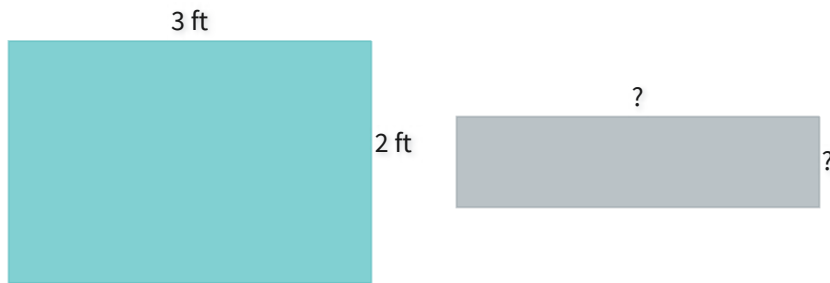


- 1in by 5in
 5in by 2in
 2in by 1in

Show your work

#10

The rectangles below have the same perimeter. If the area of the right rectangle is 4 sq ft, what are its dimensions?




- 4ft by 1ft
 1ft by 3ft
 3ft by 4ft

Show your work

#11

The rectangles below have the same perimeter. If the area of the right rectangle is 12 sq m, what are its dimensions?




- 3m by 4m
 4m by 2m
 2m by 3m

Show your work

#12

The rectangles below have the same perimeter. If the area of the right rectangle is 10 sq m, what are its dimensions?



- 5m by 1m
 2m by 5m
 1m by 2m

Show your work

Question	Answer
#1	choice 1
#2	choice 1
#3	choice 3
#4	choice 3
#5	choice 3
#6	choice 2
#7	choice 1
#8	choice 2
#9	choice 1
#10	choice 1
#11	choice 1
#12	choice 2