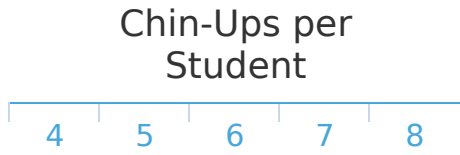


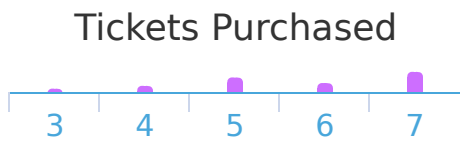
#1 Coach Landon records the number of chin-ups done by each student. How many students did chin-ups?



student(s)

Show your work

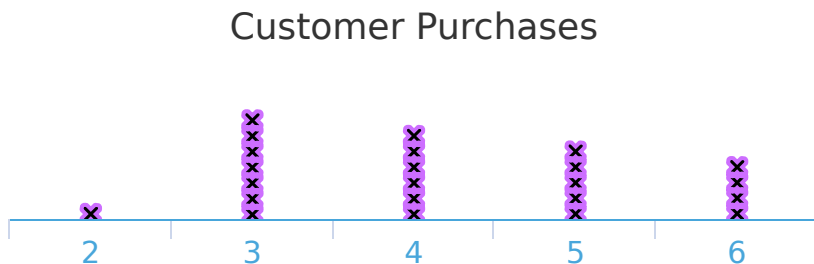
#2 Zachary sells tickets at an amusement park and records the number that each person buys. How many tickets did the greatest number of people buy?



Tickets:

Show your work

#3 Dylan owns a store and records the number of items each customer purchased. How many items did the greatest number of customers purchase?




- | | |
|-------------------------|-------------------------|
| <input type="radio"/> 6 | <input type="radio"/> 3 |
| <input type="radio"/> 1 | <input type="radio"/> 5 |

Show your work

#4

Coach Zachary records the long jump distances for each student. What distance did the lowest number of students get?

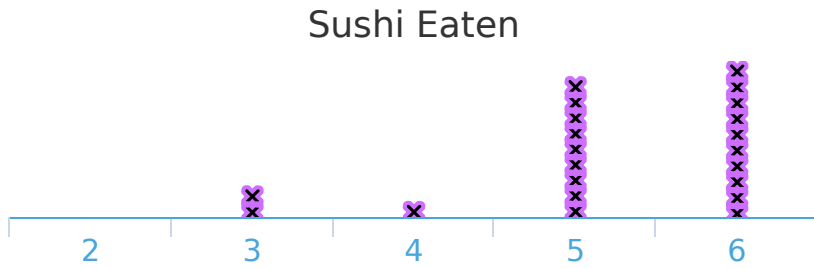


Distance:

Show your work

#5

Ella serves sushi at a party and records how many pieces each person eats. How many people ate sushi?

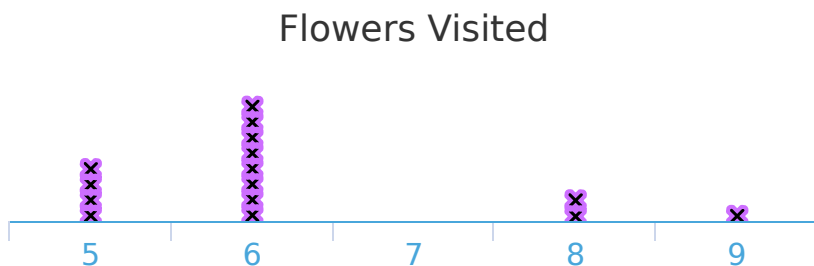


- | | |
|--------------------------|--------------------------|
| <input type="radio"/> 29 | <input type="radio"/> 28 |
| <input type="radio"/> 23 | <input type="radio"/> 22 |

Show your work

#6

Christopher is studying bees. He records how many flowers each bee visits before returning to the hive. How many flowers did the least number of bees visit?



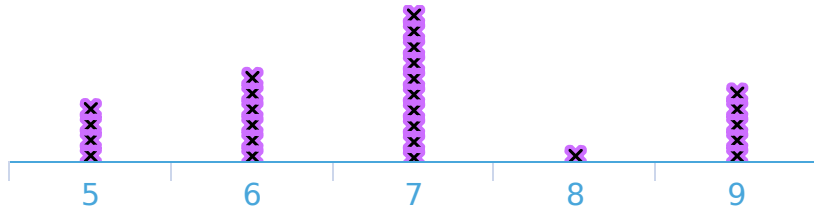
- | | |
|-------------------------|--------------------------|
| <input type="radio"/> 9 | <input type="radio"/> 6 |
| <input type="radio"/> 7 | <input type="radio"/> 10 |

Show your work

#7

Maya sells tickets at an amusement park and records the number that each person buys. How many people bought tickets?

Tickets Purchased



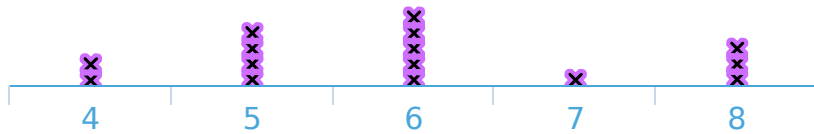
- 25
- 26
- 32
- 21

Show your work

#8

Anthony is a teacher and records the number of days that each of his students are absent. How many days did the greatest number of students miss?

Days Absent



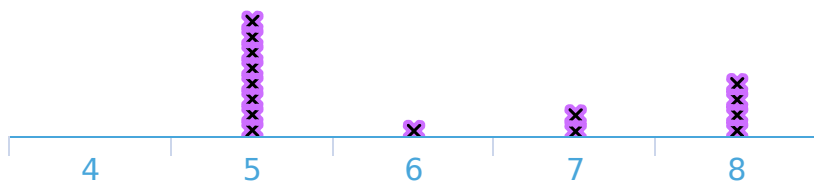
- 7
- 8
- 6
- 9

Show your work

#9

Isabelle is a teacher and records the number of days that each of her students are absent. How many students are in the class?

Days Absent



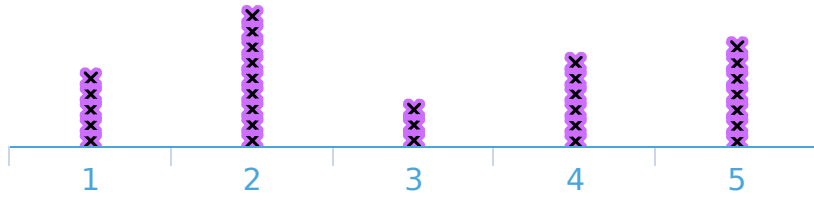
- 13
- 20
- 10
- 15

Show your work

#10

Gavin serves sushi at a party and records how many pieces each person eats. How many people ate sushi?

Sushi Eaten



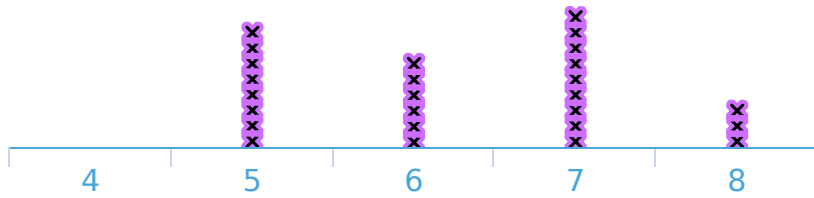
- 24
- 21
- 29
- 30

Show your work

#11

Coach Ava records the number of chin-ups done by each student. How many chin-ups did the greatest number of students get?

Chin-Ups per Student



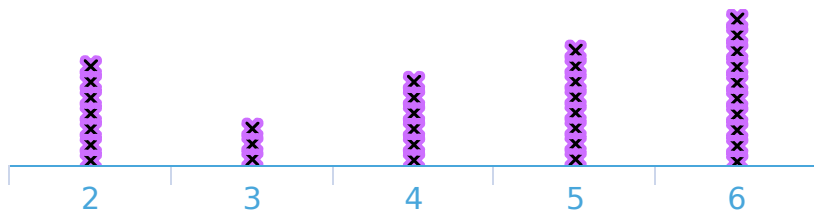
- 5
- 10
- 4
- 7

Show your work

#12

Ella is recording how many solar panels are on each house in her neighbourhood. How many solar panels were on the greatest number of houses?

Solar Panels per House



- 9
- 7
- 5
- 6

Show your work

Question	Answer
#1	24
#2	7
#3	3
#4	7
#5	22
#6	7
#7	26
#8	6
#9	15
#10	30
#11	7
#12	6