




#1

What is the measurement of this angle?
Choose the best estimate.



- 30 degrees 60 degrees
 5 degrees 90 degrees

Show your work

#2

What is the measurement of this angle?
Choose the best estimate.




- 5 degrees 30 degrees
 90 degrees 45 degrees

Show your work

#3

What is the measurement of this angle?
Choose the best estimate.



- 30 degrees 60 degrees
 90 degrees 5 degrees

Show your work



#4

What is the measurement of this angle?
Choose the best estimate.

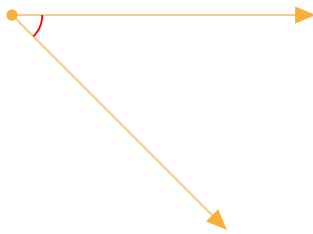


- 5 degrees
- 30 degrees
- 90 degrees
- 45 degrees

Show your work

#5

What is the measurement of this angle?
Choose the best estimate.

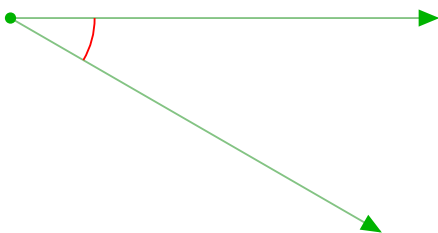


- 15 degrees
- 5 degrees
- 90 degrees
- 45 degrees

Show your work

#6

What is the measurement of this angle?
Choose the best estimate.

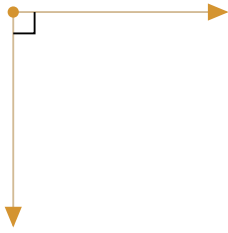


- 90 degrees
- 60 degrees
- 30 degrees
- 5 degrees

Show your work

#7

What is the measurement of this angle?
Choose the best estimate.

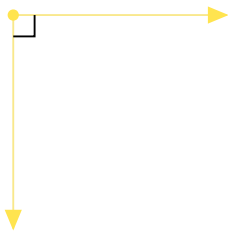


- 90 degrees 5 degrees
 15 degrees 60 degrees

Show your work

#8

What is the measurement of this angle?
Choose the best estimate.

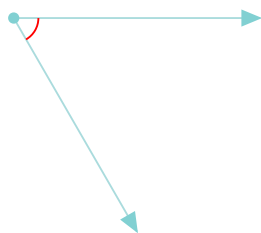


- 45 degrees 5 degrees
 90 degrees 60 degrees

Show your work

#9

What is the measurement of this angle?
Choose the best estimate.



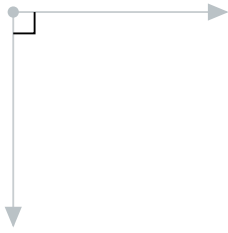
- 5 degrees 60 degrees
 15 degrees 30 degrees

Show your work



#10

What is the measurement of this angle?
Choose the best estimate.



- 30 degrees 45 degrees
 90 degrees 60 degrees

Show your work

#11

What is the measurement of this angle?
Choose the best estimate.

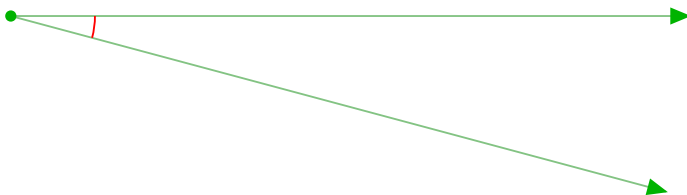


- 5 degrees 60 degrees
 45 degrees 30 degrees

Show your work

#12

What is the measurement of this angle?
Choose the best estimate.



- 60 degrees 90 degrees
 15 degrees 45 degrees

Show your work

Question	Answer
#1	choice 1
#2	choice 1
#3	choice 1
#4	choice 1
#5	choice 4
#6	choice 3
#7	choice 1
#8	choice 3
#9	choice 2
#10	choice 3
#11	choice 1
#12	choice 3