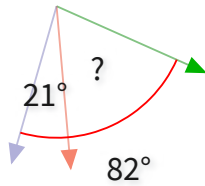


#1

What is the value of a missing angle?

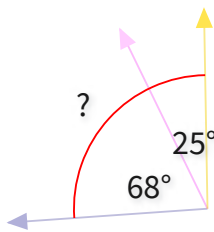


- 79°
- 48°
- 61°
- 63°

Show your work

#2

What is the value of a missing angle?

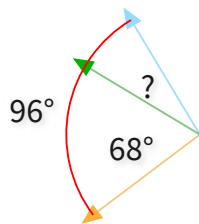


- 93°
- 99°
- 94°
- 92°

Show your work

#3

What is the value of a missing angle?

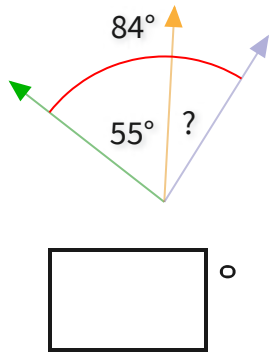


- 28°
- 24°
- 33°
- 20°

Show your work

#4

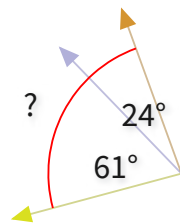
What is the value of a missing angle?



Show your work

#5

What is the value of a missing angle?



109°

64°

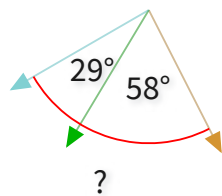
85°

60°

Show your work

#6

What is the value of a missing angle?



84°

73°

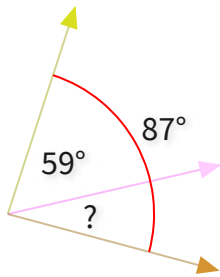
87°

109°

Show your work

#7

What is the value of a missing angle?

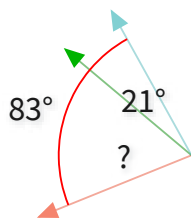


°

Show your work

#8

What is the value of a missing angle?



74°

62°

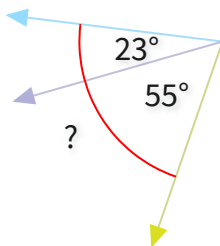
50°

75°

Show your work

#9

What is the value of a missing angle?

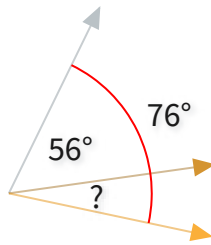


°

Show your work

#10

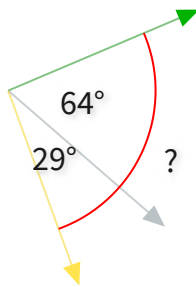
What is the value of a missing angle?


 °

Show your work

#11

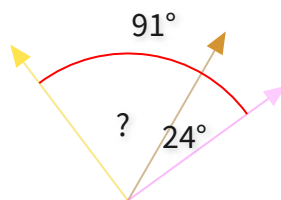
What is the value of a missing angle?


 °

Show your work

#12

What is the value of a missing angle?


 °

Show your work

Question	Answer
#1	choice 3
#2	choice 1
#3	choice 1
#4	29
#5	choice 3
#6	choice 3
#7	28
#8	choice 2
#9	78
#10	20
#11	93
#12	67