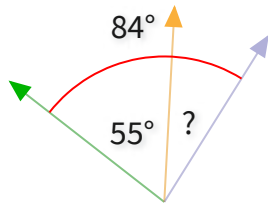




#1

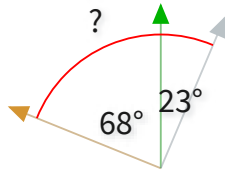
What is the value of a missing angle?



Show your work

#2

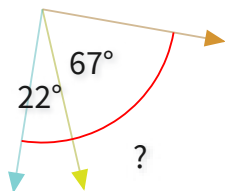
What is the value of a missing angle?

☐ 119°☐ 91°☐ 100°☐ 78°

Show your work

#3

What is the value of a missing angle?

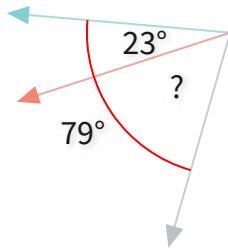
☐ 113°☐ 109°☐ 81°☐ 89°

Show your work



#4

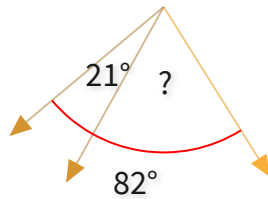
What is the value of a missing angle?

 °

Show your work

#5

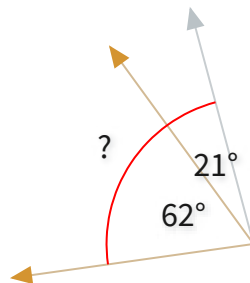
What is the value of a missing angle?

 °

Show your work

#6

What is the value of a missing angle?

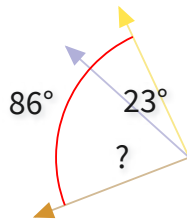
 °

Show your work



#7

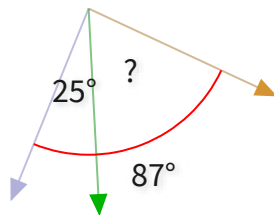
What is the value of a missing angle?

☐  $54^\circ$ ☐  $63^\circ$ ☐  $79^\circ$ ☐  $48^\circ$ 

Show your work

#8

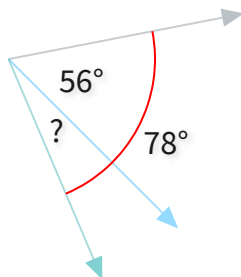
What is the value of a missing angle?



Show your work

#9

What is the value of a missing angle?

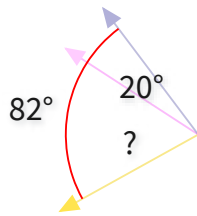


Show your work



#10

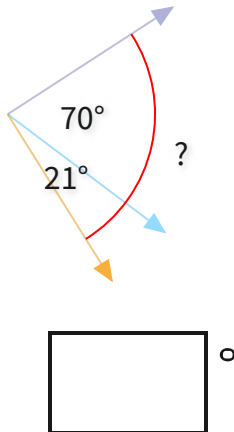
What is the value of a missing angle?

☐  $62^\circ$ ☐  $66^\circ$ ☐  $57^\circ$ ☐  $60^\circ$ 

Show your work

#11

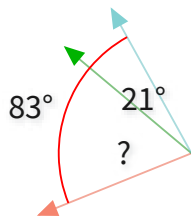
What is the value of a missing angle?



Show your work

#12

What is the value of a missing angle?

☐  $74^\circ$ ☐  $62^\circ$ ☐  $50^\circ$ ☐  $75^\circ$ 

Show your work

Question	Answer
#1	29
#2	choice 2
#3	choice 4
#4	56
#5	61
#6	83
#7	choice 2
#8	62
#9	22
#10	choice 1
#11	91
#12	choice 2