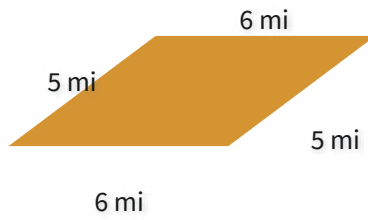
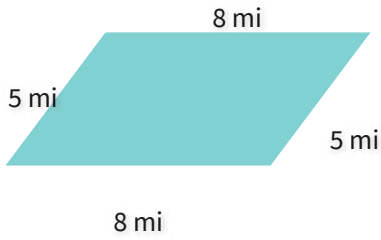


#1



Which figure has a greater perimeter?



Show your work

#2

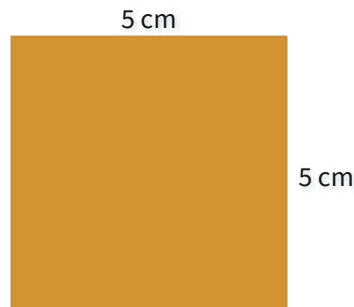

Which figure has a greater perimeter?



Show your work

#3

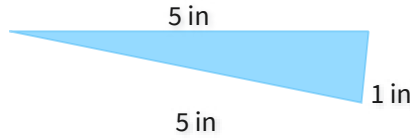
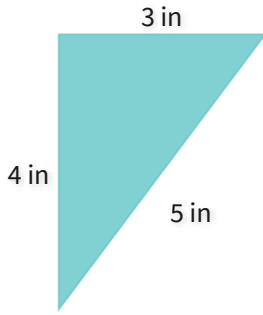
Which figure has a greater area?



Show your work

#4

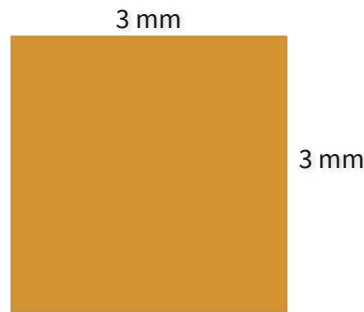
Which figure has a greater perimeter?



Show your work

#5

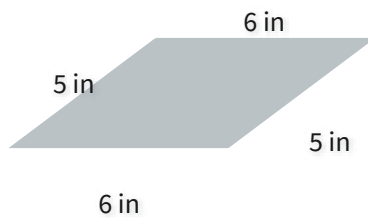
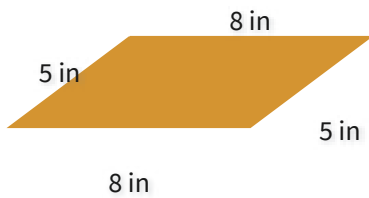
Which figure has a greater perimeter?



Show your work

#6

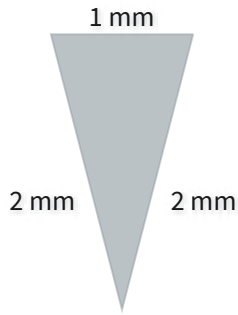
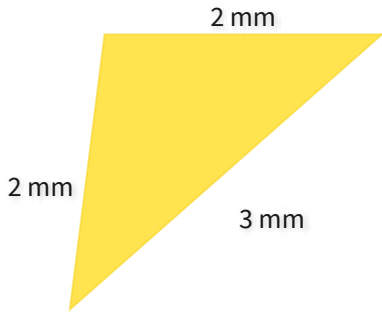
Which figure has a greater perimeter?



Show your work

#7

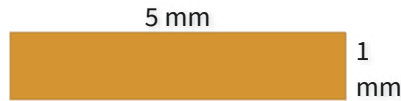
Which figure has a greater perimeter?



Show your work

#8

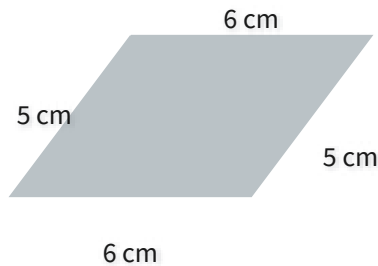
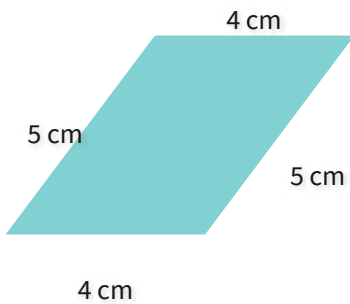
Which figure has a greater area?



Show your work

#9

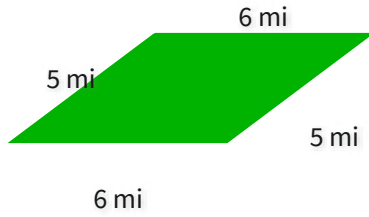
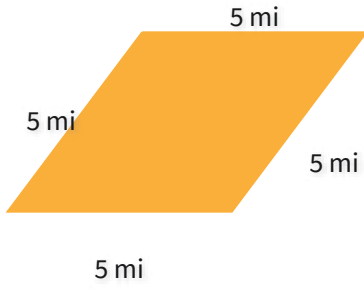
Which figure has a greater perimeter?



Show your work

#10

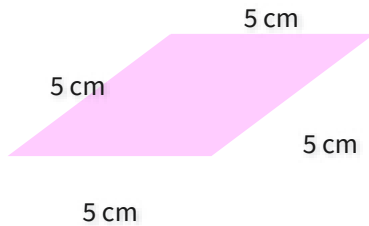
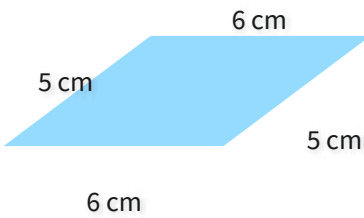
Which figure has a greater perimeter?



Show your work

#11

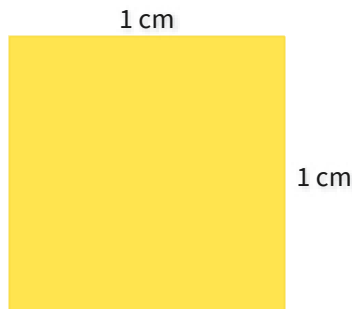
Which figure has a greater perimeter?



Show your work

#12

Which figure has a greater perimeter?



Show your work

Question	Answer
#1	choice 1
#2	choice 2
#3	choice 2
#4	choice 1
#5	choice 2
#6	choice 1
#7	choice 1
#8	choice 1
#9	choice 2
#10	choice 2
#11	choice 1
#12	choice 1