



#1

Are these lines intersecting?





Yes

No

Show your work

#2

Do these lines appear parallel?




Yes

No

Show your work

#3

Do these lines appear parallel?




Yes

No

Show your work

#4

Do these lines appear parallel?



No

Yes

Show your work

#5

Are these lines intersecting?



Yes

No

Show your work

#6

Do these lines appear parallel?



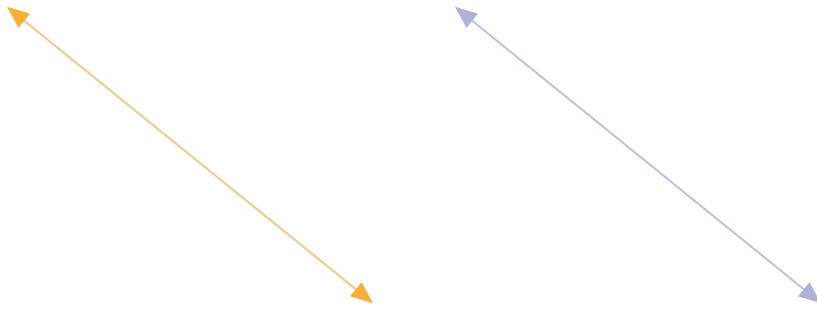
Yes

No

Show your work

#7

Are these lines intersecting?



Yes

No

Show your work

#8

Do these lines appear perpendicular?




No

Yes

Show your work

#9

Do these lines appear perpendicular?



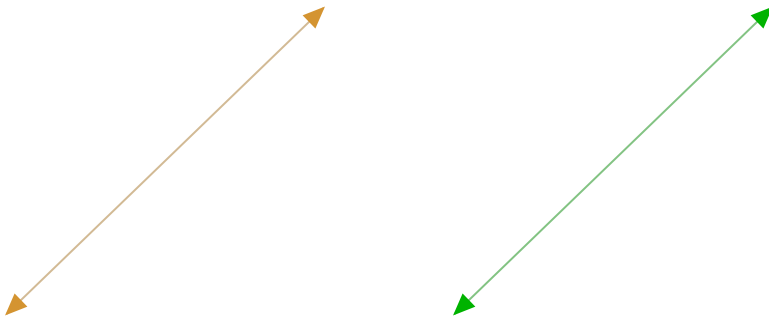
Yes

No

Show your work

#10

Do these lines appear perpendicular?




No

Yes

Show your work

#11

Do these lines appear perpendicular?




No

Yes

Show your work

#12

Do these lines appear parallel?



No

Yes

Show your work

Question	Answer
#1	choice 2
#2	choice 1
#3	choice 2
#4	choice 1
#5	choice 2
#6	choice 2
#7	choice 2
#8	choice 1
#9	choice 2
#10	choice 1
#11	choice 2
#12	choice 1