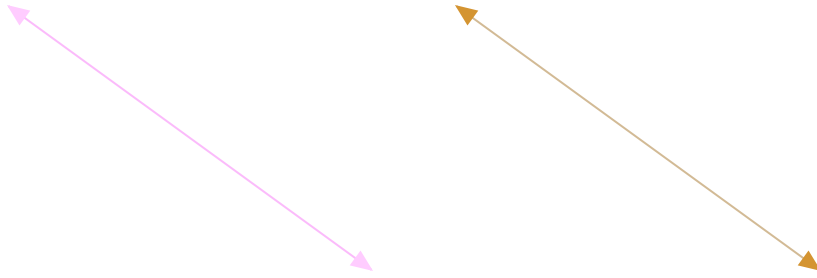


#1

Do these lines appear parallel?




No

Yes

Show your work

#2

Are these lines intersecting?




No

Yes

Show your work

#3

Do these lines appear parallel?



Yes

No

Show your work

#4

Do these lines appear parallel?



No

Yes

Show your work

#5

Do these lines appear perpendicular?




Yes

No

Show your work

#6

Are these lines intersecting?



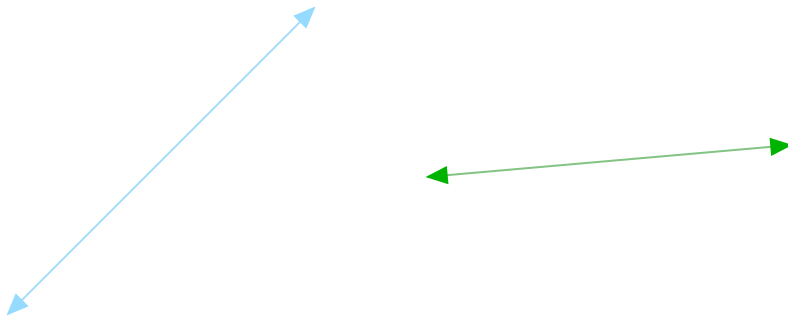
No

Yes

Show your work

#7

Do these lines appear parallel?



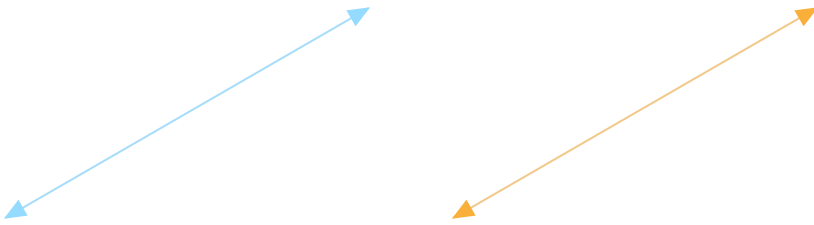
Yes

No

Show your work

#8

Do these lines appear perpendicular?



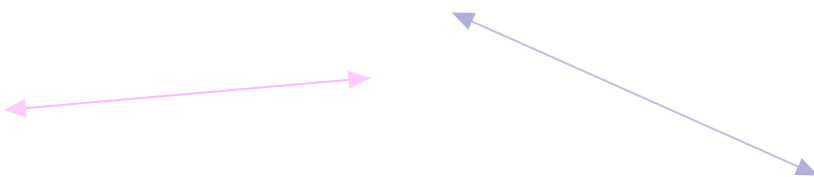
Yes

No

Show your work

#9

Are these lines intersecting?



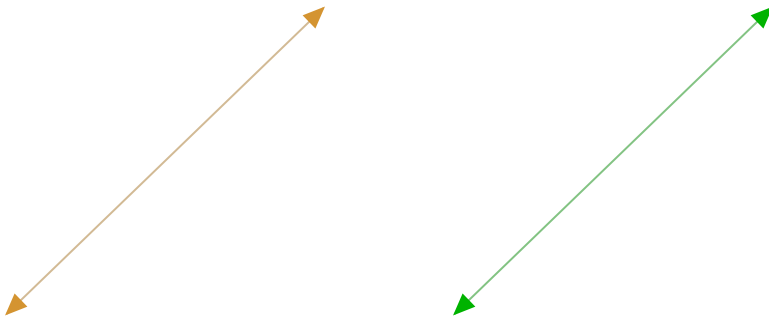
Yes

No

Show your work

#10

Do these lines appear perpendicular?




No

Yes

Show your work

#11

Are these lines intersecting?



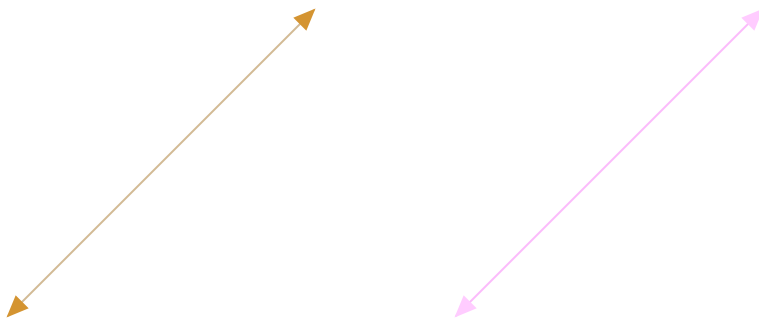
Yes

No

Show your work

#12

Do these lines appear perpendicular?



Yes

No

Show your work

Question	Answer
#1	choice 2
#2	choice 2
#3	choice 2
#4	choice 2
#5	choice 1
#6	choice 2
#7	choice 2
#8	choice 2
#9	choice 1
#10	choice 1
#11	choice 1
#12	choice 2