


#1

What kind of shape is this?




- cone
 rectangular prism
 hexagon

Show your work

#2

What kind of shape is this?




- hexagon
 triangle
 pentagon

Show your work

#3

What kind of shape is this?




- rectangular prism
 cylinder
 rectangular pyramid

Show your work

#4

What kind of shape is this?



- parallelogram
 hexagon
 circle

Show your work

#5

What kind of shape is this?



- parallelogram
 hexagon
 rectangle

Show your work

#6

What kind of shape is this?




- circle
 pentagon
 parallelogram

Show your work

#7

What kind of shape is this?




- hexagon
 triangle
 square

Show your work

#8

What kind of shape is this?




- cylinder
 rectangular pyramid
 cone

Show your work

#9

What kind of shape is this?



- cylinder
 rectangular pyramid
 cone

Show your work



#10

What kind of shape is this?



- parallelogram hexagon cylinder

Show your work

#11

What kind of shape is this?




- rectangle square rectangular prism

Show your work

#12

What kind of shape is this?



- triangular prism rectangular prism pentagon

Show your work

Question	Answer
#1	choice 2
#2	choice 2
#3	choice 3
#4	choice 2
#5	choice 1
#6	choice 3
#7	choice 1
#8	choice 3
#9	choice 3
#10	choice 1
#11	choice 2
#12	choice 1