

#1

What kind of shape is this?




- cube
 triangular pyramid
 square

Show your work

#2

What kind of shape is this?




- triangle
 square
 hexagon

Show your work

#3

What kind of shape is this?




- rectangle
 triangular prism
 rectangular prism

Show your work

#4

What kind of shape is this?



- pentagon
 hexagon
 cube

Show your work

#5

What kind of shape is this?



- circle
 cylinder
 cone

Show your work

#6

What kind of shape is this?




- rectangular pyramid
 parallelogram
 hexagon

Show your work

#7

What kind of shape is this?




- rectangle
 triangular pyramid
 cylinder

Show your work

#8

What kind of shape is this?




- triangular prism
 hexagon
 triangle

Show your work

#9

What kind of shape is this?



- hexagon
 cone
 triangle

Show your work



#10

What kind of shape is this?




- hexagon triangular pyramid circle

Show your work

#11

What kind of shape is this?




- rectangular pyramid triangular pyramid cylinder

Show your work

#12

What kind of shape is this?



- pentagon circle rectangular prism

Show your work

Question	Answer
#1	choice 3
#2	choice 1
#3	choice 2
#4	choice 1
#5	choice 2
#6	choice 2
#7	choice 2
#8	choice 1
#9	choice 1
#10	choice 2
#11	choice 1
#12	choice 3