
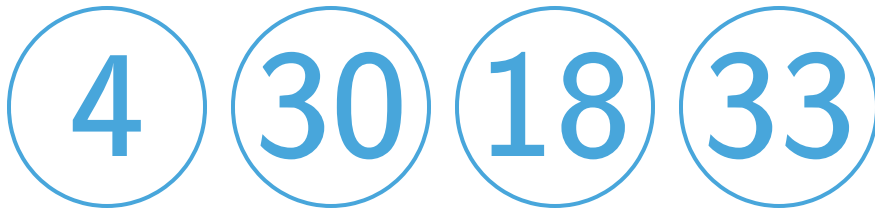


#1

Which two numbers have a sum of 48?



Show your work

#2

Which two numbers have a sum of 46?



Show your work

#3

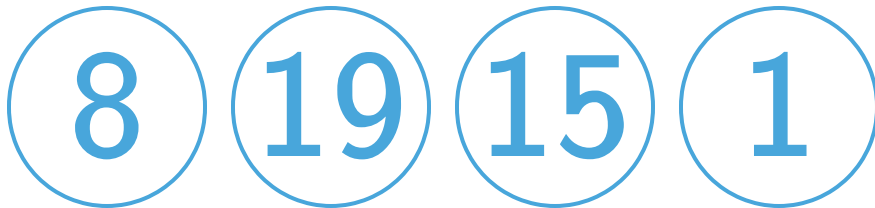
Which two numbers have a sum of 58?



Show your work

#4

Which two numbers have a sum of 34?



Show your work

#5

Which two numbers have a sum of 8?



Show your work

#6

Which two numbers have a sum of 83?



Show your work

#7

Which two numbers have a sum of 48?



Show your work

#8

Which two numbers have a sum of 58?



Show your work

#9

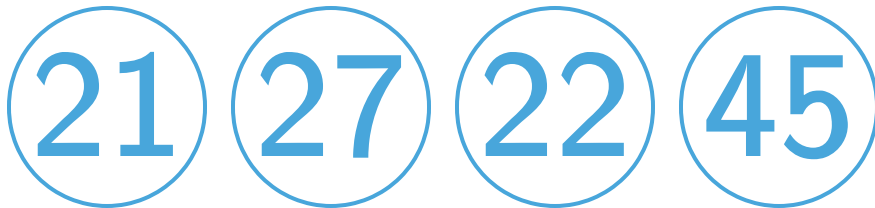
Which two numbers have a sum of 32?



Show your work

#10


Which two numbers have a sum of 49?



Show your work

#11

Which two numbers have a sum of 58?



Show your work

#12

Which two numbers have a sum of 25?



Show your work

Question	Answer
#1	choice 2, choice 3
#2	choice 1, choice 4
#3	choice 4, choice 2
#4	choice 2, choice 3
#5	choice 2, choice 4
#6	choice 2, choice 4
#7	choice 4, choice 3
#8	choice 4, choice 2
#9	choice 4, choice 1
#10	choice 3, choice 2
#11	choice 4, choice 3
#12	choice 4, choice 3