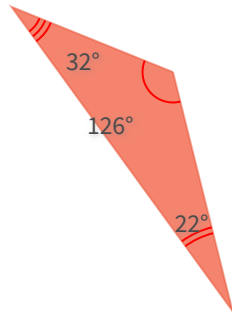


#1

What kind of triangle is this?

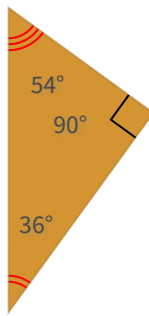


- Acute
 Right
 Obtuse

Show your work

#2

What kind of triangle is this?

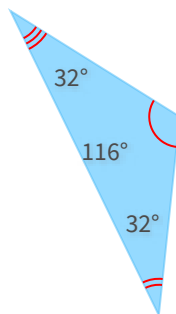


- Right
 Obtuse
 Acute

Show your work

#3

What kind of triangle is this?

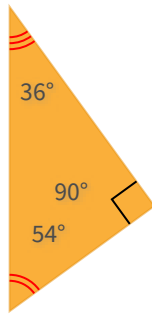


- Right
 Obtuse
 Acute

Show your work

#4

What kind of triangle is this?

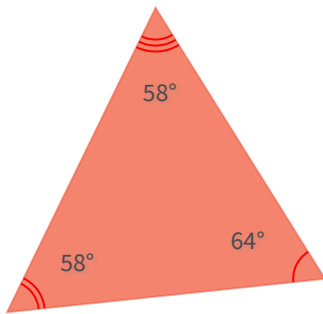


- Obtuse
 Acute
 Right

Show your work

#5

What kind of triangle is this?

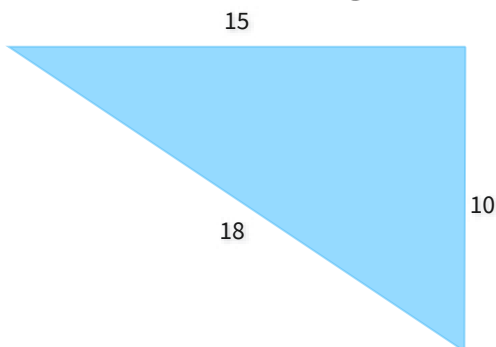


- Obtuse
 Right
 Acute

Show your work

#6

What kind of triangle is this?

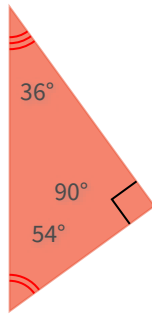


- Scalene
 Equilateral
 Isosceles but not equilateral

Show your work

#7

What kind of triangle is this?

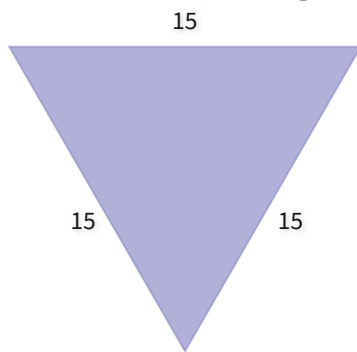


- Right
 Acute
 Obtuse

Show your work

#8

What kind of triangle is this?




- Equilateral
 Scalene
 Isosceles but not equilateral

Show your work

#9

What kind of triangle is this?

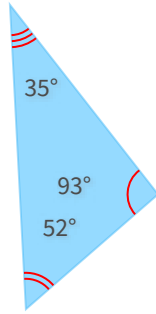


- Isosceles but not equilateral
 Equilateral
 Scalene

Show your work

#10

What kind of triangle is this?

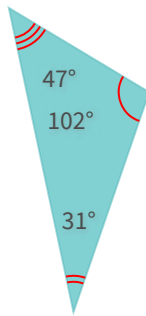


- Acute Right Obtuse

Show your work

#11

What kind of triangle is this?

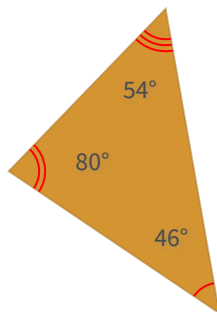


- Acute Obtuse Right

Show your work

#12

What kind of triangle is this?



- Obtuse Acute Right

Show your work

Question	Answer
#1	choice 3
#2	choice 1
#3	choice 2
#4	choice 3
#5	choice 3
#6	choice 1
#7	choice 1
#8	choice 1
#9	choice 1
#10	choice 3
#11	choice 2
#12	choice 2