

#1

Is this shape a quadrilateral?




- No
  Yes

Show your work

#2

Is this shape a rectangle?



- No
  Yes

Show your work

#3

Is this shape a parallelogram?




- Yes
  No

Show your work

#4

Is this shape a parallelogram?



No

Yes

Show your work

#5

Is this shape a quadrilateral?



Yes

No

Show your work

#6

Is this shape a parallelogram?




No

Yes

Show your work

#7

Is this shape a trapezoid?



Yes

No

Show your work

#8

Is this shape a rhombus?




No

Yes

Show your work

#9

Is this shape a parallelogram?



Yes

No

Show your work



#10

Is this shape a rectangle?



Yes

No

Show your work

#11

Is this shape a quadrilateral?




Yes

No

Show your work

#12

Is this shape a quadrilateral?



No

Yes

Show your work

Question	Answer
#1	choice 2
#2	choice 1
#3	choice 1
#4	choice 1
#5	choice 1
#6	choice 2
#7	choice 1
#8	choice 1
#9	choice 1
#10	choice 1
#11	choice 1
#12	choice 2