




#1

Is this shape open or closed?



Open

Closed

Show your work

#2

Is this shape open or closed?



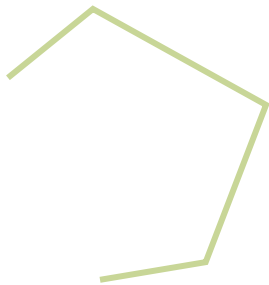
Closed

Open

Show your work

#3

Is this shape open or closed?



Closed


Open

Show your work



#4

Is this shape open or closed?



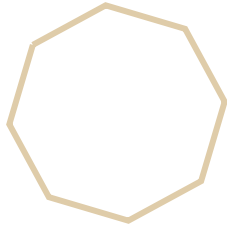
Closed

Open

Show your work

#5

Is this shape open or closed?



Open

Closed

Show your work

#6

Is this shape open or closed?



Open


Closed

Show your work



#7

Is this shape open or closed?



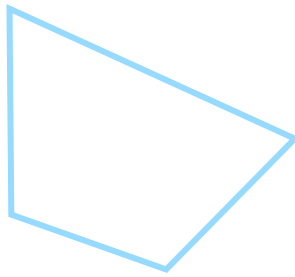
Open

Closed

Show your work

#8

Is this shape open or closed?



Open

Closed

Show your work

#9

Is this shape open or closed?



Closed


Open

Show your work



#10

Is this shape open or closed?



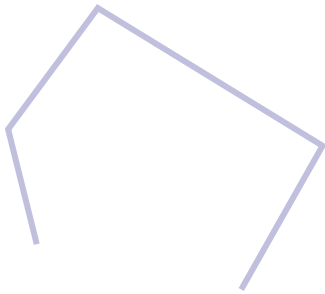
Open

Closed

Show your work

#11

Is this shape open or closed?



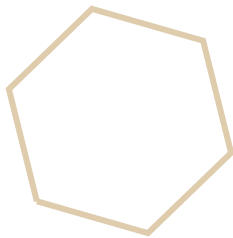
Open

Closed

Show your work

#12

Is this shape open or closed?



Open

Closed

Show your work

| Question | Answer   |
|----------|----------|
| #1       | choice 2 |
| #2       | choice 1 |
| #3       | choice 2 |
| #4       | choice 1 |
| #5       | choice 2 |
| #6       | choice 2 |
| #7       | choice 1 |
| #8       | choice 2 |
| #9       | choice 2 |
| #10      | choice 1 |
| #11      | choice 1 |
| #12      | choice 2 |